

Arbeitsblatt

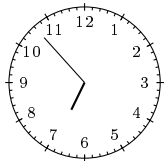
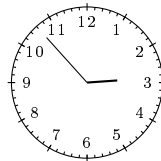
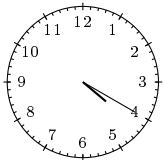
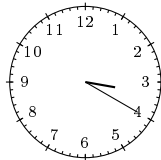
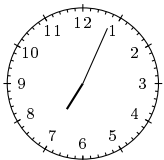
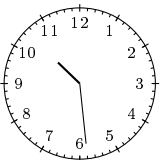
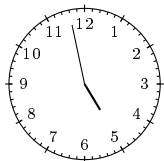
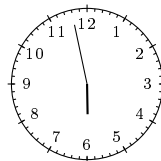
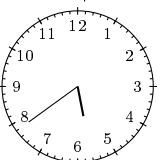
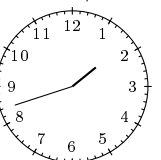
28.07.2013

Kostenlos auf dw-aufgaben.de

Aufgaben-Quickname: 5840

Aufgabe 1

Zeichne die Stunden- und Minutenzeiger zu der angegebenen Uhrzeit ein.

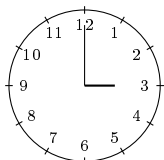
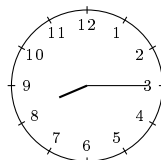
Quick:
5840a) sieben Minuten
vor Siebenb) sieben Minuten
vor Dreic) zwanzig nach
Vierd) zwanzig nach
Dreie) vier Minuten
nach Siebenf) eine Minute vor
halb Elfg) zwei Minuten
vor Fünfh) zwei Minuten
vor Sechsi) neun nach halb
Sechsj) achtzehn vor
Zwei

Aufgabe 2

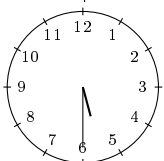
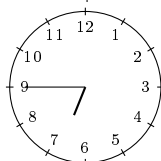
Zeichne die Stunden- und Minutenzeiger zu der angegebenen Uhrzeit ein.

Quick:
5840

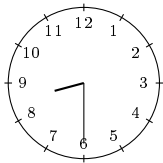
a) Drei

b) viertel nach
Acht

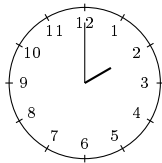
c) halb Sechs

d) viertel vor
Sieben

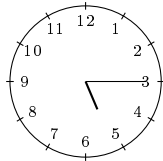
e) halb Neun



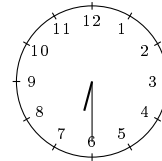
f) Zwei



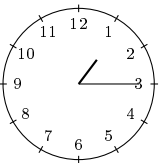
g) viertel nach Fünf



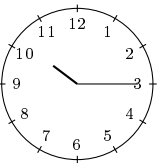
h) halb Sieben



i) viertel nach Eins



j) viertel nach Zehn

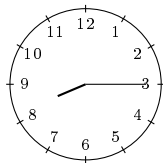


Aufgabe 3

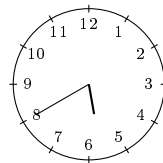
Zeichne die Stunden- und Minutenzeiger zu der angegebenen Uhrzeit ein.

Quick:
5840

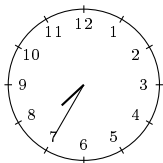
a) 20:15 Uhr



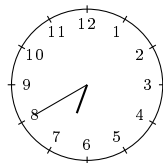
b) 17:40 Uhr



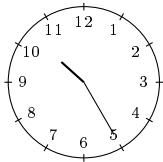
c) 7:35 Uhr



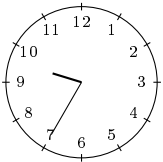
d) 6:40 Uhr



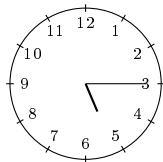
e) 22:25 Uhr



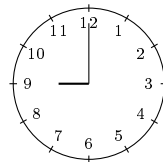
f) 21:35 Uhr



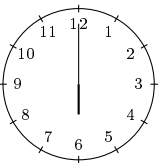
g) 5:15 Uhr



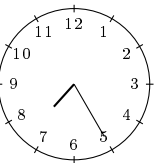
h) 21:00 Uhr



i) 6:00 Uhr



j) 7:25 Uhr

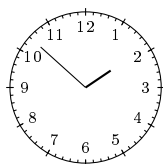


Aufgabe 4

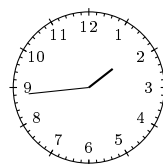
Zeichne die Stunden- und Minutenzeiger zu der angegebenen Uhrzeit ein.

Quick:
5840

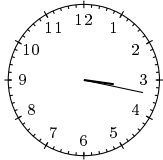
a) 13:52 Uhr



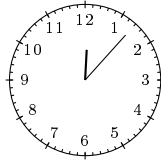
b) 1:44 Uhr



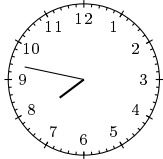
c) 15:17 Uhr



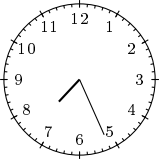
d) 0:07 Uhr



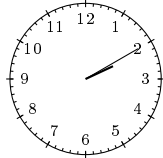
e) 7:47 Uhr



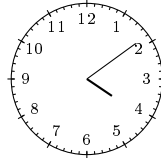
f) 19:26 Uhr



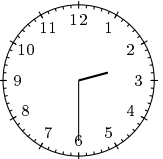
g) 14:10 Uhr




h) 16:09 Uhr



i) 2:30 Uhr



j) 1:31 Uhr



Viel Erfolg!