

# Arbeitsblatt

28.07.2013

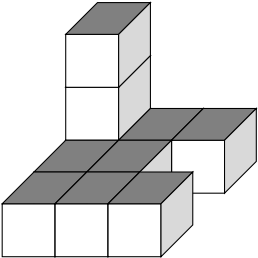
Kostenlos auf [dw-aufgaben.de](http://dw-aufgaben.de)

Aufgaben-Quickname: 6866

## Aufgabe 1

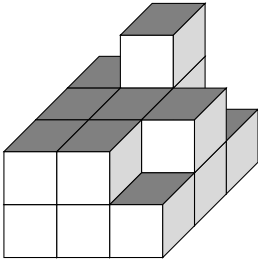
Wie viele Klötze fehlen, um den Turm zu einem Quader zu ergänzen?

Quick:  
6866

a) 

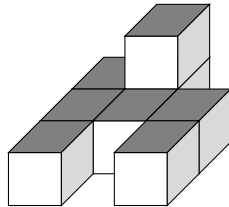
0	2	2
2	2	3
2	2	2

  
=17

b) 

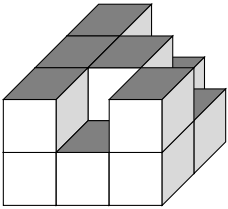
1	0	2
1	1	1
1	1	2

  
=10

c) 

1	0	2
1	1	1
1	2	1

  
=10

d) 

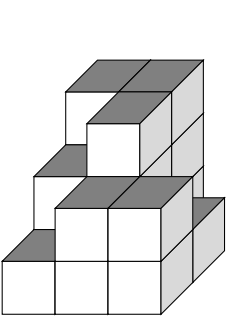
0	1	2
0	0	1
0	1	0

  
=5

## Aufgabe 2

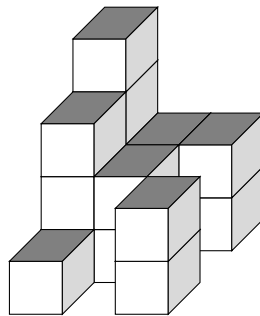
Wie viele Klötze fehlen, um den Turm zu einem Quader zu ergänzen?

Quick:  
6866

a) 

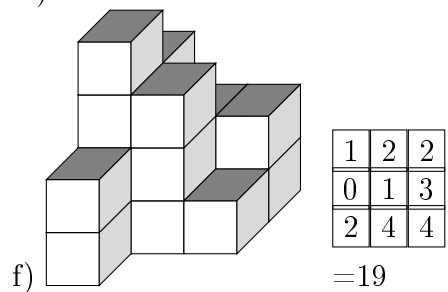
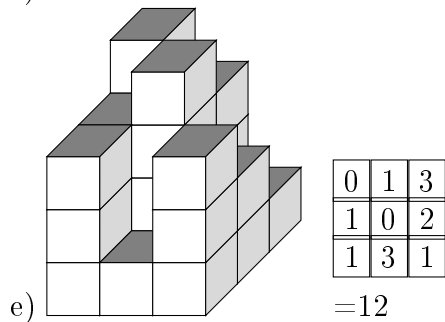
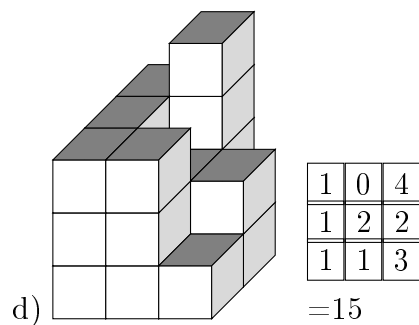
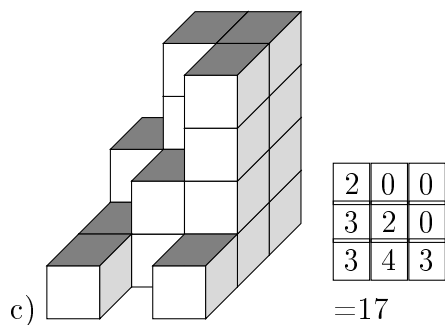
0	0	3
1	0	2
2	1	1

  
=10

b) 

0	2	2
1	2	4
3	4	2

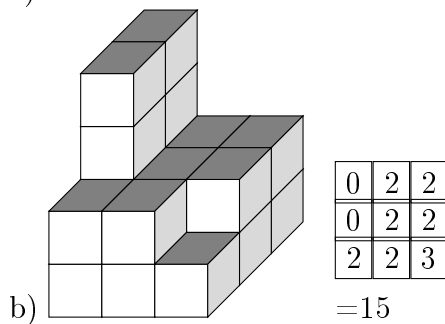
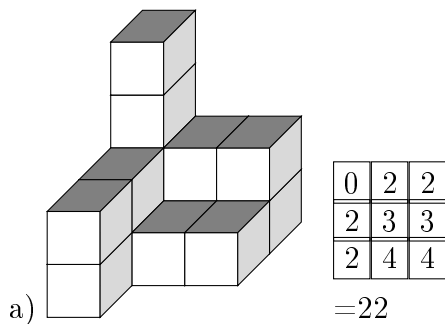
  
=20

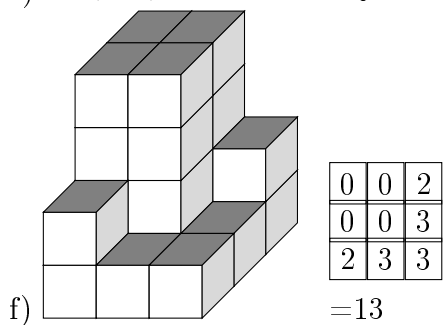
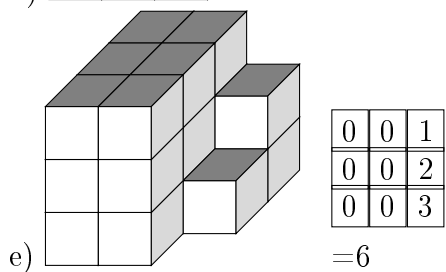
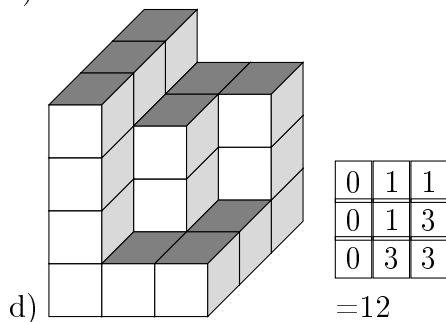
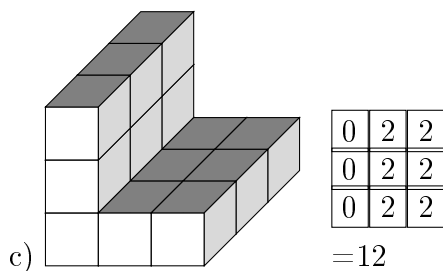


Aufgabe 3

Wie viele Klötze fehlen, um den Turm zu einem Quader zu ergänzen?

Quick:  
6866

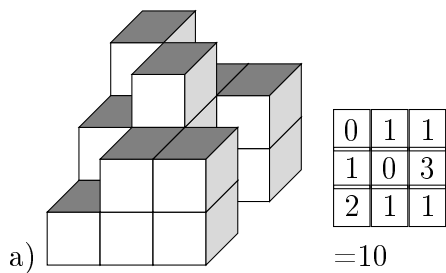


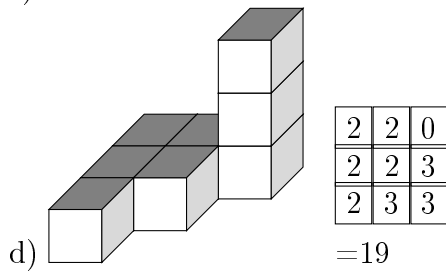
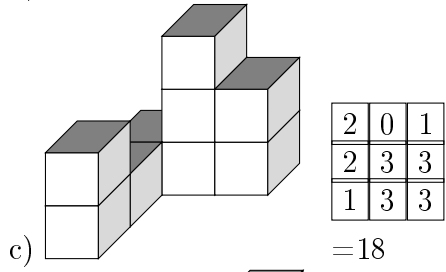
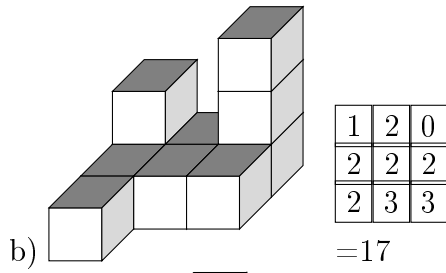


Aufgabe 4

Wie viele Klötze fehlen, um den Turm zu einem Quader zu ergänzen?

Quick:  
6866





Viel Erfolg!