

# Arbeitsblatt

28.07.2013

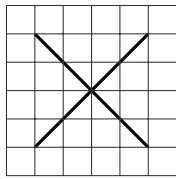
Kostenlos auf [dw-aufgaben.de](http://dw-aufgaben.de)

Aufgaben-Quickname: 5813

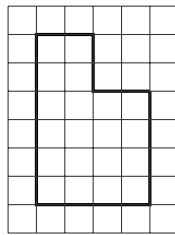
## Aufgabe 1

Liegt die entsprechende Symmetrie bei der jeweiligen Figur vor? Kreuze an!

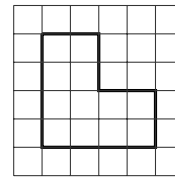
a)



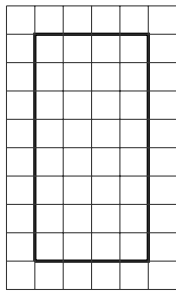
Punktsymmetrie   
Achsensymmetrie



Punktsymmetrie   
Achsensymmetrie

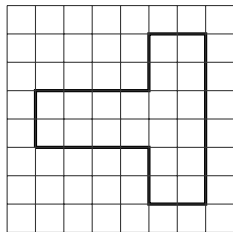


Punktsymmetrie   
Achsensymmetrie

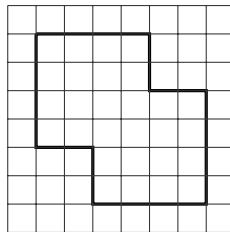


Punktsymmetrie   
Achsensymmetrie

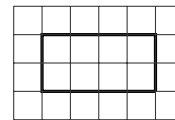
b)




Punktsymmetrie   
Achsensymmetrie



Punktsymmetrie   
Achsensymmetrie



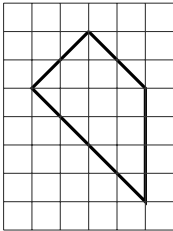
Punktsymmetrie   
Achsensymmetrie




Punktsymmetrie   
 Achsensymmetrie

Aufgabe 2

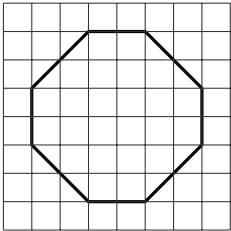
Liegt die entsprechende Symmetrie bei der jeweiligen Figur vor? Kreuze an!

a) 

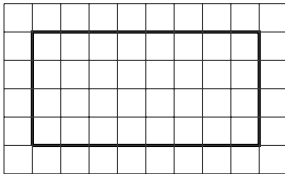
Punktsymmetrie   
 Achsensymmetrie




Punktsymmetrie   
 Achsensymmetrie




Punktsymmetrie   
 Achsensymmetrie

b) 


Punktsymmetrie   
 Achsensymmetrie



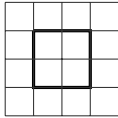
Punktsymmetrie   
 Achsensymmetrie



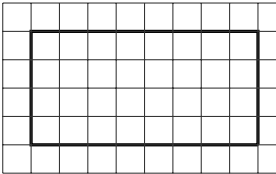
Punktsymmetrie   
 Achsensymmetrie

c) 

Punktsymmetrie   
 Achsensymmetrie



Punktsymmetrie   
 Achsensymmetrie

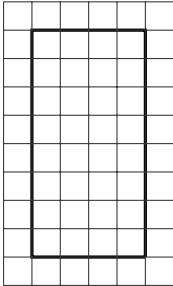


Punktsymmetrie   
 Achsensymmetrie


### Aufgabe 3

Liegt die entsprechende Symmetrie bei der jeweiligen Figur vor? Kreuze an!


a)



Punktsymmetrie   
Achsensymmetrie




Punktsymmetrie   
Achsensymmetrie

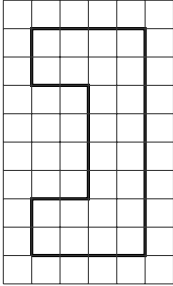


Punktsymmetrie   
Achsensymmetrie

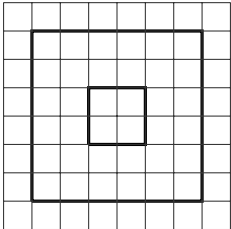
b)



Punktsymmetrie   
Achsensymmetrie

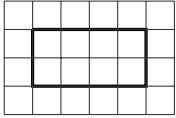


Punktsymmetrie   
Achsensymmetrie

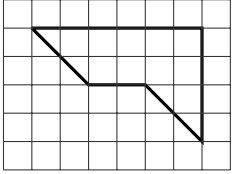


Punktsymmetrie   
Achsensymmetrie


c)



Punktsymmetrie   
Achsensymmetrie



Punktsymmetrie   
Achsensymmetrie




Punktsymmetrie   
Achsensymmetrie


### Aufgabe 4

Liegt die entsprechende Symmetrie bei der jeweiligen Figur vor? Kreuze an!


a)




Punktsymmetrie   
Achsensymmetrie



Punktsymmetrie   
Achsensymmetrie

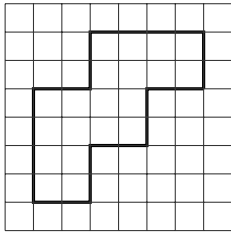


Punktsymmetrie   
Achsensymmetrie

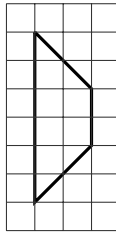


Punktsymmetrie   
Achsensymmetrie

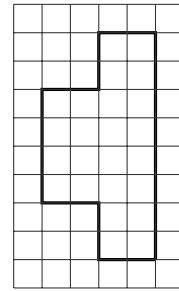
b)




Punktsymmetrie   
Achsensymmetrie



Punktsymmetrie   
Achsensymmetrie



Punktsymmetrie   
Achsensymmetrie



Punktsymmetrie   
Achsensymmetrie

Viel Erfolg!