

# Arbeitsblatt

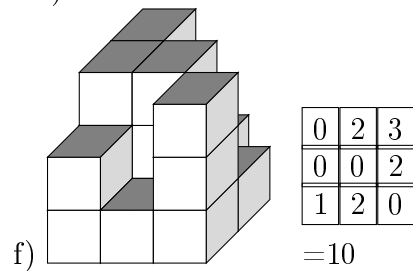
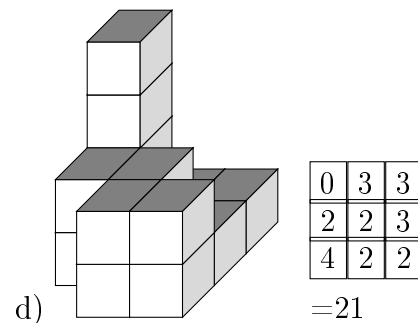
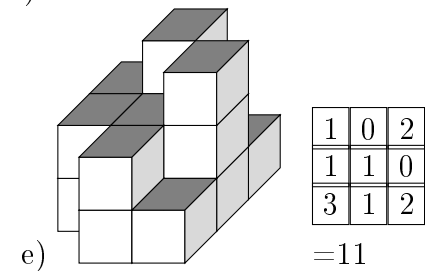
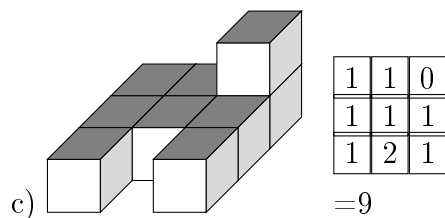
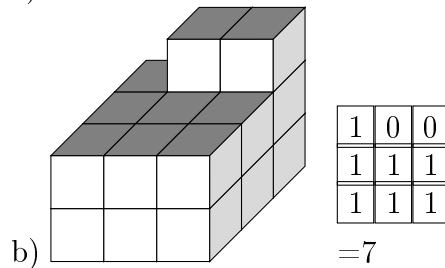
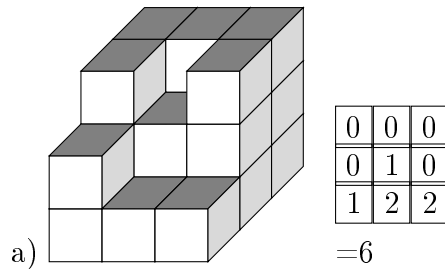
28.07.2013

Kostenlos auf [dw-aufgaben.de](http://dw-aufgaben.de)

Aufgaben-Quickname: 6866

## Aufgabe 1

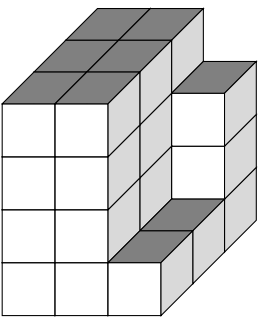
Wie viele Klötze fehlen, um den Turm zu einem Quader zu ergänzen?

Quick:  
6866

Aufgabe 2

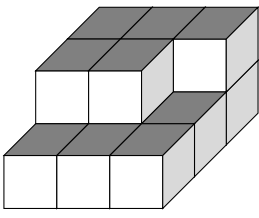
Quick:  
6866

Wie viele Klötze fehlen, um den Turm zu einem Quader zu ergänzen?

a) 

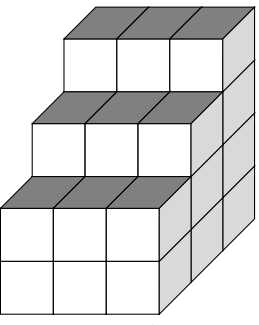
0	0	1
0	0	3
0	0	3

  
=7

b) 

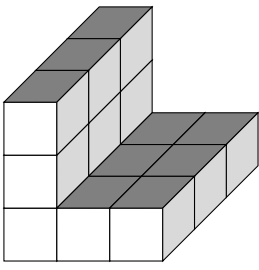
0	0	0
0	0	1
1	1	1

  
=4

c) 

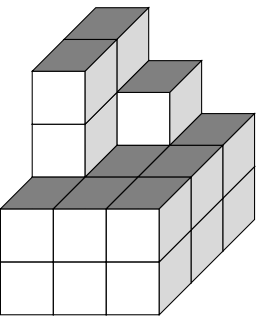
0	0	0
1	1	1
2	2	2

  
=9

d) 

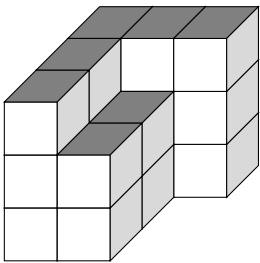
0	2	2
0	2	2
0	2	2

  
=12

e) 

0	1	2
0	2	2
2	2	2

  
=13

f) 

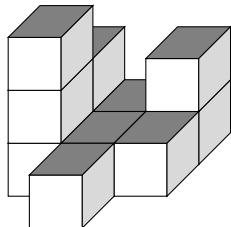
0	0	0
0	1	3
0	1	3

  
=8

Aufgabe 3

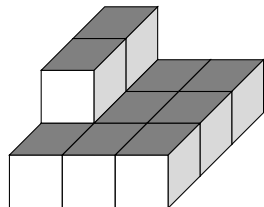
Wie viele Klötze fehlen, um den Turm zu einem Quader zu ergänzen?

Quick:  
6866

a) 

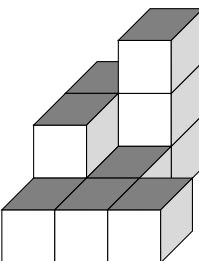
1	2	1
0	2	2
3	2	3

  
=16

b) 

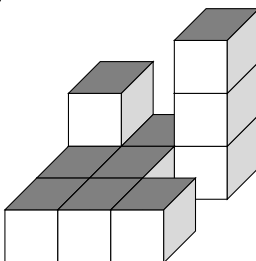
0	1	1
0	1	1
1	1	1

  
=7

c) 

1	0	3
1	2	3
2	2	2

  
=16

d) 

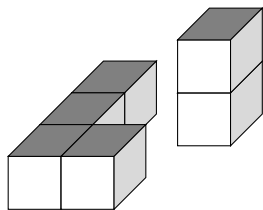
1	2	0
2	2	3
2	2	2

  
=16

Aufgabe 4

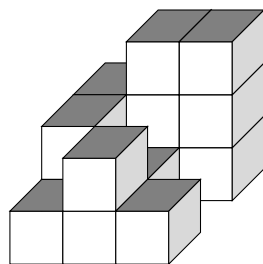
Wie viele Klötze fehlen, um den Turm zu einem Quader zu ergänzen?

Quick:  
6866

a) 

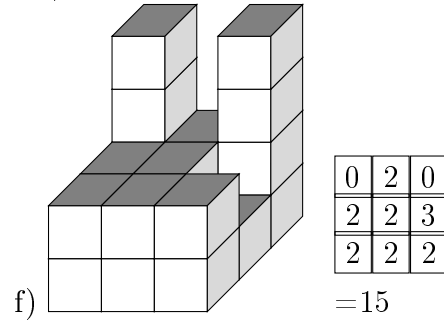
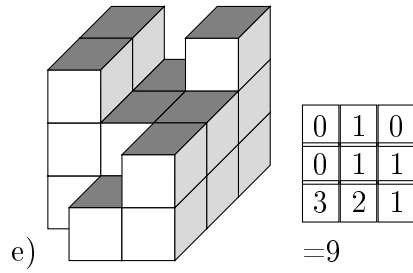
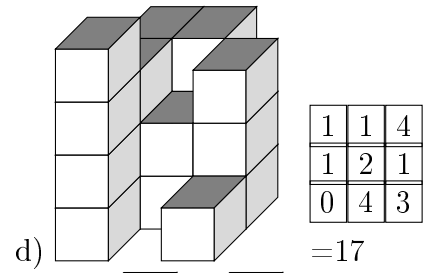
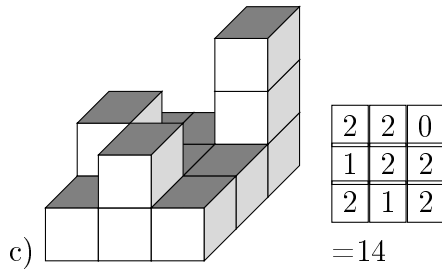
1	2	0
1	2	2
1	1	2

  
=12

b) 

1	0	0
1	2	3
2	1	2

  
=12



Viel Erfolg!