

# Arbeitsblatt

28.07.2013

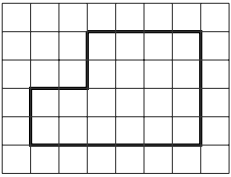
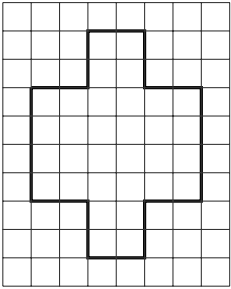
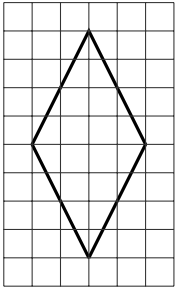
Kostenlos auf [dw-aufgaben.de](http://dw-aufgaben.de)

Aufgaben-Quickname: 5813



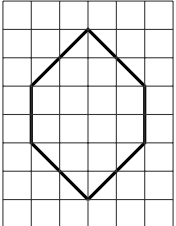
## Aufgabe 1

Liegt die entsprechende Symmetrie bei der jeweiligen Figur vor? Kreuze an!



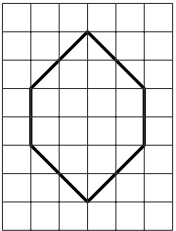
a)

		
Punktsymmetrie <input type="checkbox"/>	Punktsymmetrie <input type="checkbox"/>	Punktsymmetrie <input type="checkbox"/>
Achsensymmetrie <input type="checkbox"/>	Achsensymmetrie <input type="checkbox"/>	Achsensymmetrie <input type="checkbox"/>

b)

		
Punktsymmetrie <input type="checkbox"/>	Punktsymmetrie <input type="checkbox"/>	Punktsymmetrie <input type="checkbox"/>
Achsensymmetrie <input type="checkbox"/>	Achsensymmetrie <input type="checkbox"/>	Achsensymmetrie <input type="checkbox"/>

c)

		
Punktsymmetrie <input type="checkbox"/>	Punktsymmetrie <input type="checkbox"/>	Punktsymmetrie <input type="checkbox"/>
Achsensymmetrie <input type="checkbox"/>	Achsensymmetrie <input type="checkbox"/>	Achsensymmetrie <input type="checkbox"/>

## Aufgabe 2

Liegt die entsprechende Symmetrie bei der jeweiligen Figur vor? Kreuze an!

a)

Punktsymmetrie <input type="checkbox"/>	Punktsymmetrie <input type="checkbox"/>	Punktsymmetrie <input type="checkbox"/>
Achsensymmetrie <input type="checkbox"/>	Achsensymmetrie <input type="checkbox"/>	Achsensymmetrie <input type="checkbox"/>

b)

Punktsymmetrie <input type="checkbox"/>	Punktsymmetrie <input type="checkbox"/>	Punktsymmetrie <input type="checkbox"/>
Achsensymmetrie <input type="checkbox"/>	Achsensymmetrie <input type="checkbox"/>	Achsensymmetrie <input type="checkbox"/>

c)

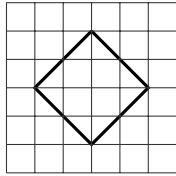
Punktsymmetrie <input type="checkbox"/>	Punktsymmetrie <input type="checkbox"/>	Punktsymmetrie <input type="checkbox"/>
Achsensymmetrie <input type="checkbox"/>	Achsensymmetrie <input type="checkbox"/>	Achsensymmetrie <input type="checkbox"/>

## Aufgabe 3

Liegt die entsprechende Symmetrie bei der jeweiligen Figur vor? Kreuze an!


a)

Punktsymmetrie <input type="checkbox"/>	Punktsymmetrie <input type="checkbox"/>	Punktsymmetrie <input type="checkbox"/>
Achsensymmetrie <input type="checkbox"/>	Achsensymmetrie <input type="checkbox"/>	Achsensymmetrie <input type="checkbox"/>

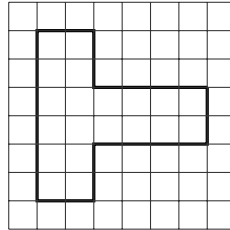


Punktsymmetrie   
 Achsensymmetrie

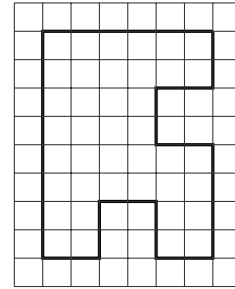
b)




Punktsymmetrie   
 Achsensymmetrie



Punktsymmetrie   
 Achsensymmetrie



Punktsymmetrie   
 Achsensymmetrie

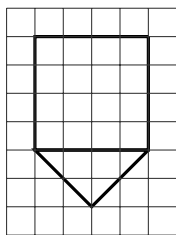


Punktsymmetrie   
 Achsensymmetrie

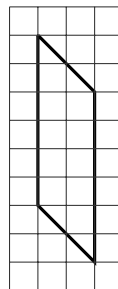
#### Aufgabe 4

Liegt die entsprechende Symmetrie bei der jeweiligen Figur vor? Kreuze an!

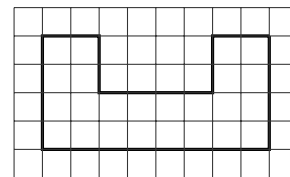
a)



Punktsymmetrie   
 Achsensymmetrie




Punktsymmetrie   
 Achsensymmetrie

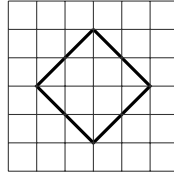


Punktsymmetrie   
 Achsensymmetrie

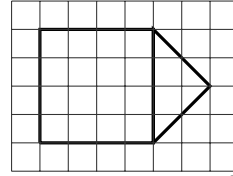
b)



Punktsymmetrie   
Achsensymmetrie

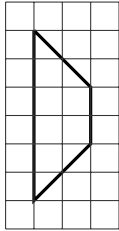


Punktsymmetrie   
Achsensymmetrie




Punktsymmetrie   
Achsensymmetrie

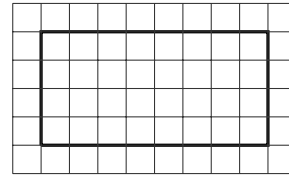
c)



Punktsymmetrie   
Achsensymmetrie



Punktsymmetrie   
Achsensymmetrie



Punktsymmetrie   
Achsensymmetrie

Viel Erfolg!