

# Arbeitsblatt


28.07.2013


Kostenlos auf [dw-aufgaben.de](http://dw-aufgaben.de)

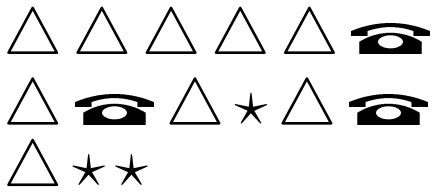
Aufgaben-Quickname: 6002

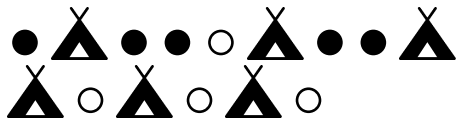
## Aufgabe 1


Zähle die Bilder! Wie viele siehst Du von jeder Sorte? Fahre fort wie im Beispiel.


a)   
 $\circ = 4$     $\bullet = 7$   
 $\heartsuit = 4$

b)   
 $\text{house} = \square$     $\text{envelope} = \square$   
 $\text{heart} = \square$

c)   
 $\star = \square$     $\triangle = \square$   
 $\text{phone} = \square$


d)   
 $\text{triangle with X} = \square$     $\bullet = \square$   
 $\circ = \square$

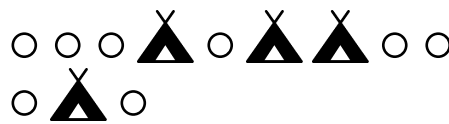
e)   
 $\bullet = \square$     $\star = \square$   
 $\text{phone} = \square$

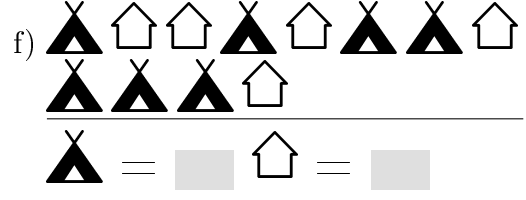

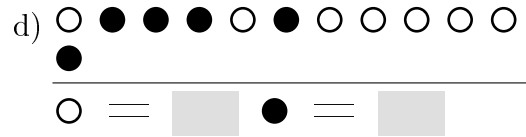
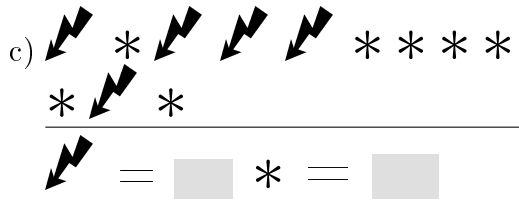
f)   
 $\text{phone} = \square$     $\bullet = \square$   
 $\star = \square$

## Aufgabe 2

Zähle die Bilder! Wie viele siehst Du von jeder Sorte? Fahre fort wie im Beispiel.

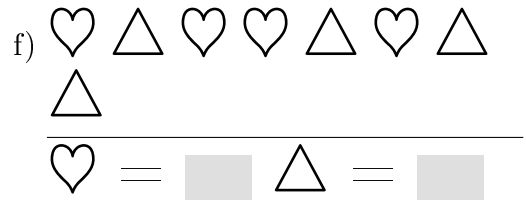
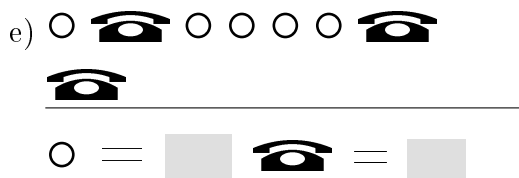
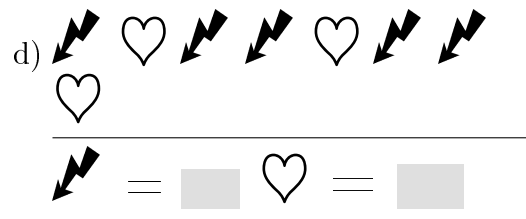
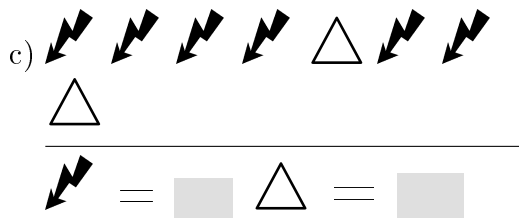
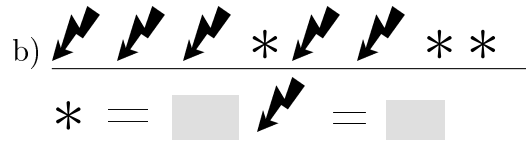
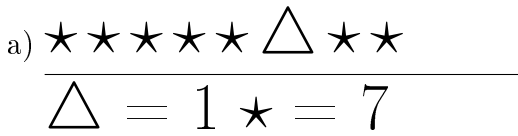
a)   
 $\heartsuit = 5$     $\bullet = 9$

b)   
 $\circ = \square$     $\text{triangle with X} = \square$




Aufgabe 3

Zähle die Bilder! Wie viele siehst Du von jeder Sorte? Fahre fort wie im Beispiel.




### Aufgabe 4

Zähle die Bilder! Wie viele siehst Du von jeder Sorte? Fahre fort wie im Beispiel.

a) 


---

● = 3   ★ = 7  
 ▲ = 8   \* = 2

b) 


---

✉ =    \* =   
 △ =    ♥ =

c) 


---

▲ =    ● =   
 ♥ =    ⚡ =

d) 

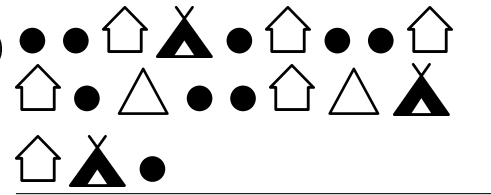
---

● =    ☁ =   
 ▲ =    🏠 =

e) 

---

✉ =    \* =   
 ⚡ =    △ =

f) 

---

△ =    🏠 =   
 ● =    ▲ =

Viel Erfolg!