

# Arbeitsblatt

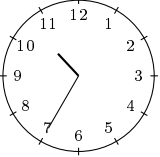
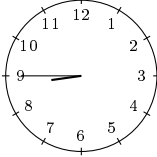
28.07.2013

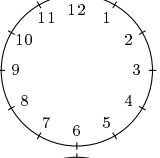
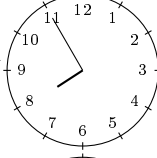
Kostenlos auf [dw-aufgaben.de](http://dw-aufgaben.de)

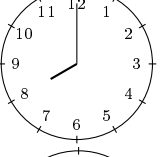
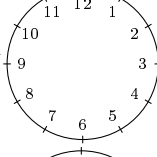
Aufgaben-Quickname: 6191

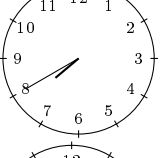
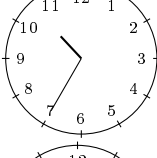
## Aufgabe 1

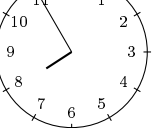
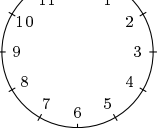
Eine Zeitspanne vergeht. Zwei Uhren zeigen die Zeit vorher und nachher. Ergänze die fehlenden Zeiger oder Zeitspannen.

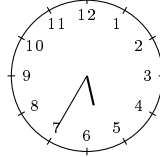
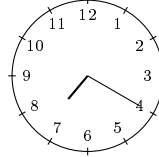
a)  +  

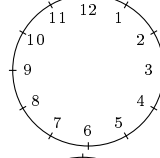
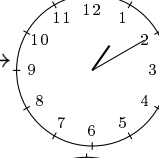
c)  +7:45 

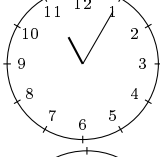
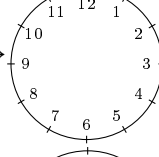
e)  +7:00 

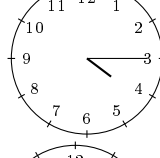
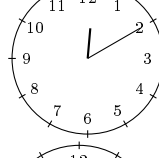
g)  +  

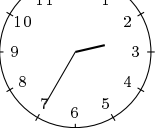
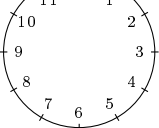
i)  +6:25 

b)  +  

d)  +3:20 

f)  +8:15 

h)  +  

j)  +7:40 

## Aufgabe 2

Eine Zeitspanne vergeht. Zwei Uhren zeigen die Zeit vorher und nachher. Ergänze die fehlende Uhrzeit oder Zeitspannen.

a)  :  +10:08  16:33

c)  08:31 +3:23  :

e)  05:56 +4:47  :

g)  04:18 +   15:36

b)  03:41 +   10:01

d)  : +11:42  19:58

f)  05:41 +2:19  :

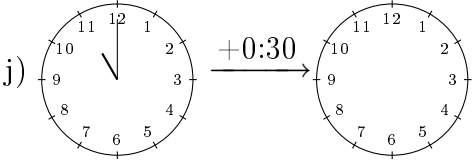
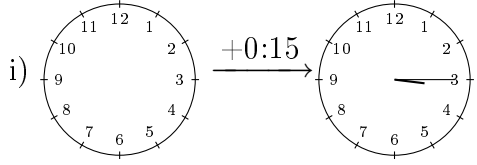
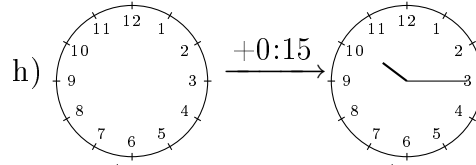
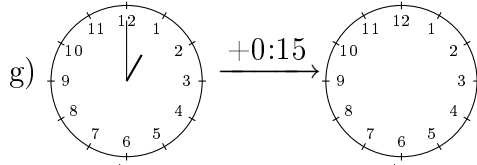
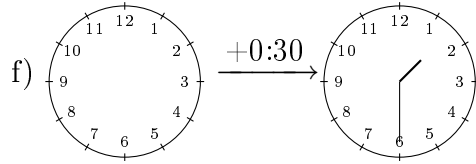
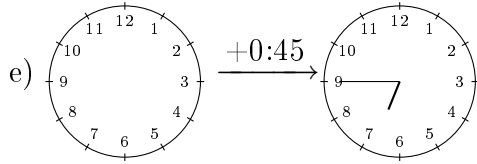
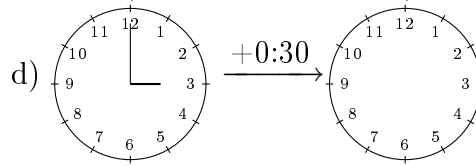
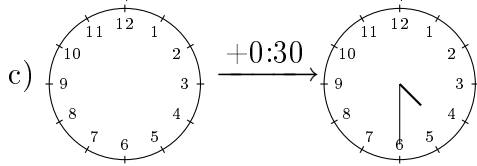
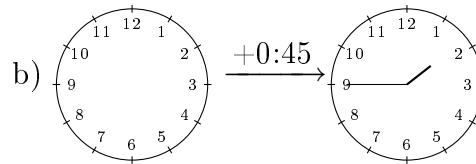
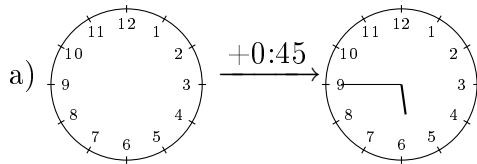
h)  05:35 +   15:32

i)  $\boxed{03:30} \xrightarrow{+5:16} \boxed{:}$

j)  $\boxed{:} \xrightarrow{+0:17} \boxed{05:44}$

### Aufgabe 3

Eine Zeitspanne vergeht. Zwei Uhren zeigen die Zeit vorher und nachher. Ergänze die fehlenden Zeiger oder Zeitspannen.



### Aufgabe 4

Eine Zeitspanne vergeht. Zwei Uhren zeigen die Zeit vorher und nachher. Ergänze die fehlende Uhrzeit oder Zeitspannen.

a)  $\boxed{05:06} \xrightarrow{+0:16} \boxed{:}$

b)  $\boxed{08:32} \xrightarrow{+ \square} \boxed{08:36}$

c)  $\boxed{06:26} \xrightarrow{+ \square} \boxed{06:46}$

d)  $\boxed{:} \xrightarrow{+0:44} \boxed{09:55}$

e)  $\boxed{:} \xrightarrow{+0:49} \boxed{10:58}$

f)  $\boxed{02:05} \xrightarrow{+0:06} \boxed{:}$

g)  $\boxed{01:54} \xrightarrow{+ \square} \boxed{01:59}$

h)  $\boxed{09:38} \xrightarrow{+0:13} \boxed{:}$

i)  $\boxed{05:31} \xrightarrow{+0:21} \boxed{:}$

j)  $\boxed{07:36} \xrightarrow{+ \square} \boxed{07:57}$

Viel Erfolg!