

Arbeitsblatt

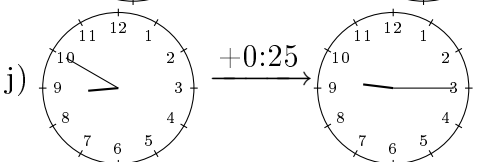
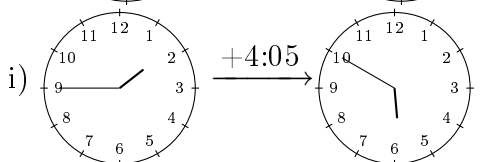
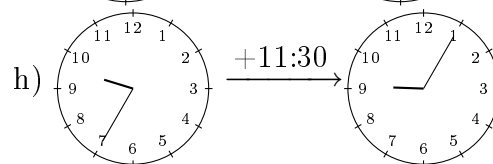
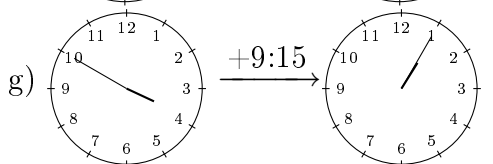
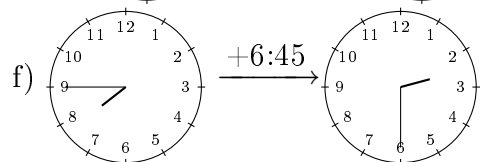
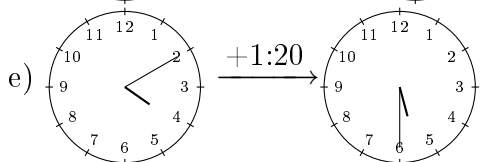
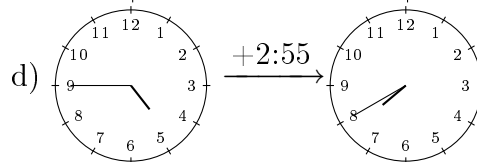
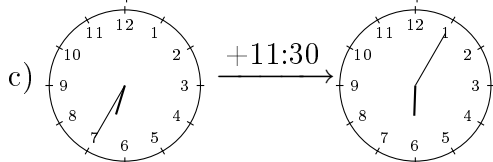
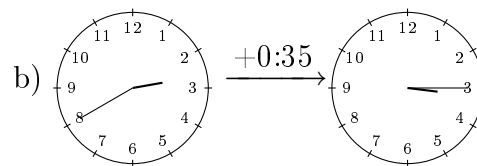
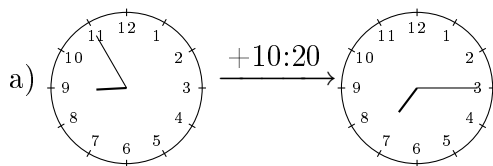
28.07.2013

Kostenlos auf dw-aufgaben.de

Aufgaben-Quickname: 6191

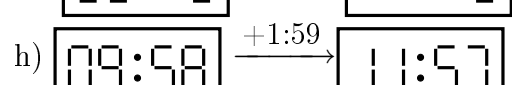
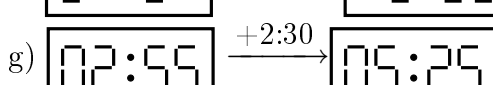
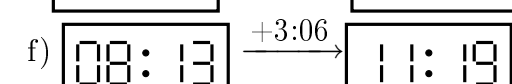
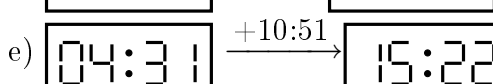
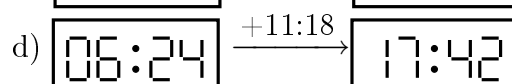
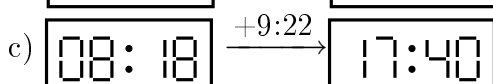
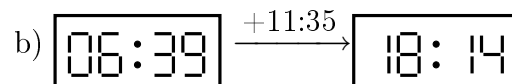
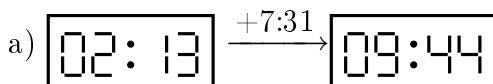
Aufgabe 1

Eine Zeitspanne vergeht. Zwei Uhren zeigen die Zeit vorher und nachher. Ergänze die fehlenden Zeiger oder Zeitspannen.

Quick:
6191

Aufgabe 2

Eine Zeitspanne vergeht. Zwei Uhren zeigen die Zeit vorher und nachher. Ergänze die fehlende Uhrzeit oder Zeitspannen.

Quick:
6191

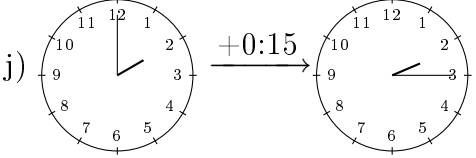
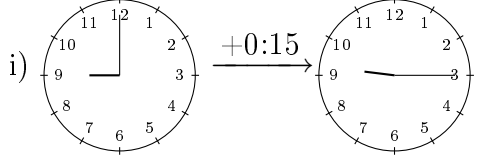
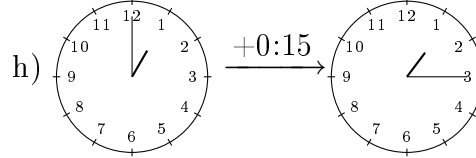
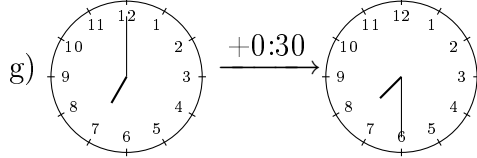
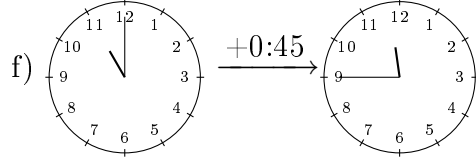
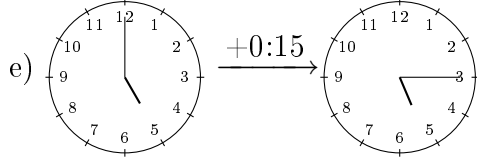
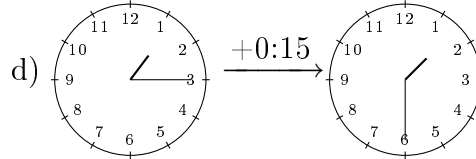
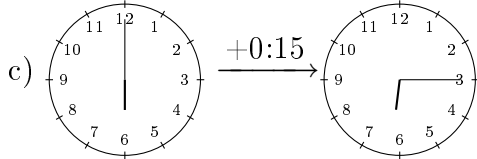
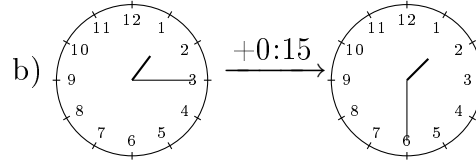
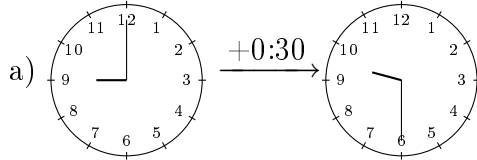
i) $\boxed{02:25} \xrightarrow{+6:39} \boxed{09:04}$

j) $\boxed{04:28} \xrightarrow{+5:30} \boxed{09:58}$

Aufgabe 3

Quick:
6191

Eine Zeitspanne vergeht. Zwei Uhren zeigen die Zeit vorher und nachher. Ergänze die fehlenden Zeiger oder Zeitspannen.



Aufgabe 4

Quick:
6191

Eine Zeitspanne vergeht. Zwei Uhren zeigen die Zeit vorher und nachher. Ergänze die fehlende Uhrzeit oder Zeitspannen.

a) $\boxed{06:46} \xrightarrow{+0:02} \boxed{06:48}$

b) $\boxed{08:22} \xrightarrow{+0:20} \boxed{08:42}$

c) $\boxed{07:36} \xrightarrow{+0:09} \boxed{07:45}$

d) $\boxed{04:46} \xrightarrow{+0:12} \boxed{04:58}$

e) $\boxed{06:41} \xrightarrow{+0:08} \boxed{06:49}$

f) $\boxed{10:29} \xrightarrow{+0:06} \boxed{10:35}$

g) $\boxed{05:14} \xrightarrow{+0:14} \boxed{05:28}$

h) $\boxed{01:28} \xrightarrow{+0:17} \boxed{01:45}$

i) $\boxed{01:06} \xrightarrow{+0:06} \boxed{01:12}$

j) $\boxed{10:19} \xrightarrow{+0:14} \boxed{10:33}$

Viel Erfolg!