

# Arbeitsblatt

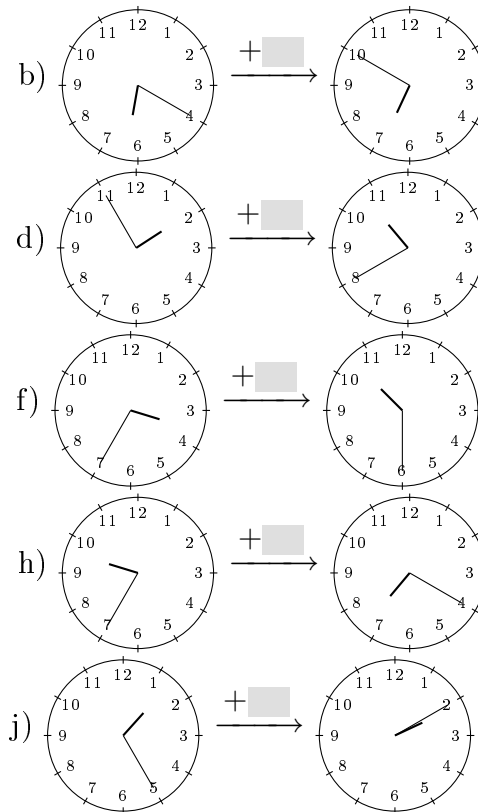
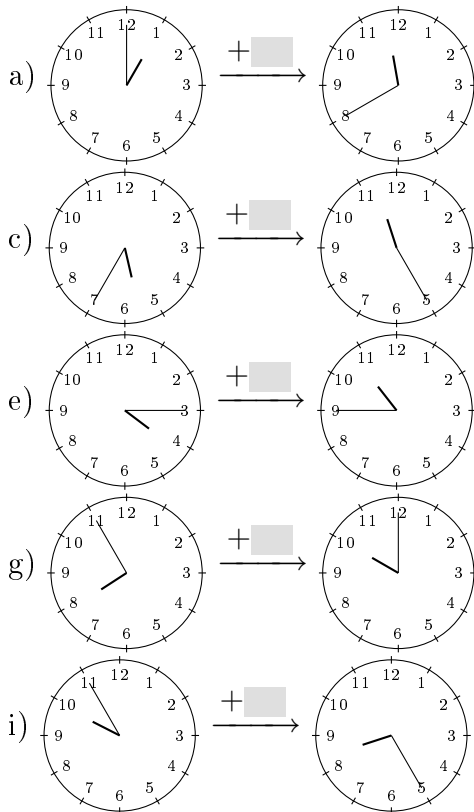
28.07.2013

Kostenlos auf [dw-aufgaben.de](http://dw-aufgaben.de)

Aufgaben-Quickname: 6272

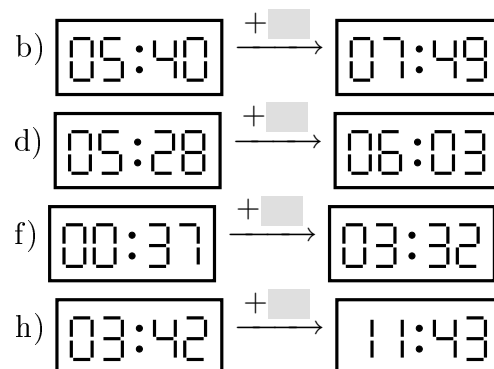
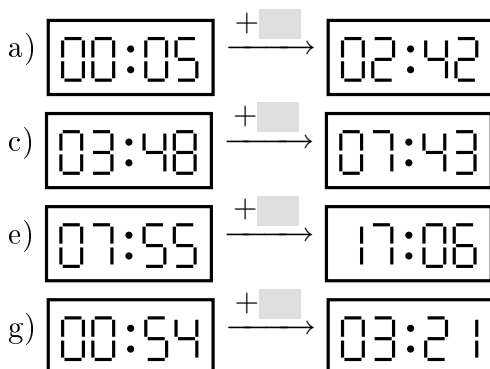
## Aufgabe 1

Wie viel Zeit ist zwischen linkem und rechtem Uhrenstand mindestens vergangen?



## Aufgabe 2

Wie viel Zeit ist zwischen linkem und rechtem Uhrenstand mindestens vergangen?

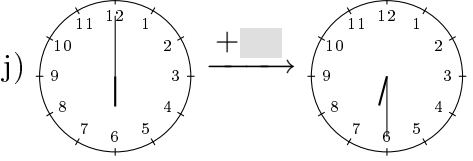
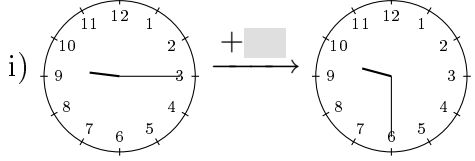
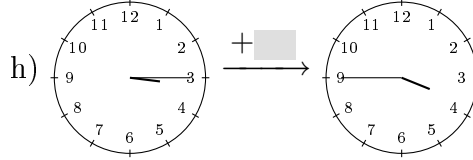
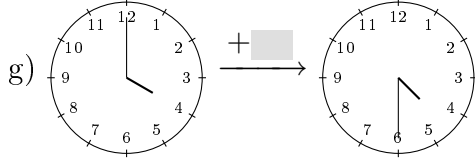
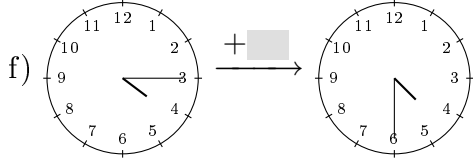
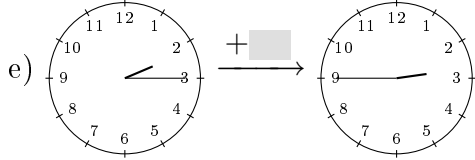
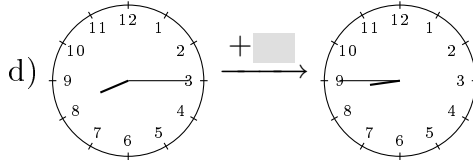
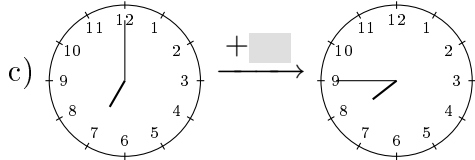
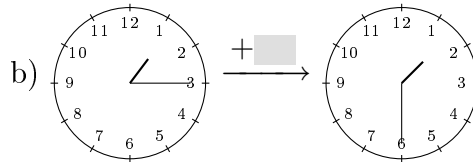
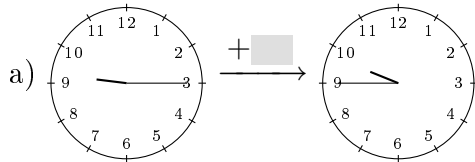


i)  $\boxed{06:04} \xrightarrow{+ \square} \boxed{08:42}$

j)  $\boxed{09:38} \xrightarrow{+ \square} \boxed{21:30}$

### Aufgabe 3

Wie viel Zeit ist zwischen linkem und rechtem Uhrenstand mindestens vergangen?



### Aufgabe 4

Wie viel Zeit ist zwischen linkem und rechtem Uhrenstand mindestens vergangen?

a)  $\boxed{10:07} \xrightarrow{+ \square} \boxed{13:46}$

b)  $\boxed{07:46} \xrightarrow{+ \square} \boxed{11:06}$

c)  $\boxed{09:40} \xrightarrow{+ \square} \boxed{15:19}$

d)  $\boxed{10:46} \xrightarrow{+ \square} \boxed{11:07}$

e)  $\boxed{00:49} \xrightarrow{+ \square} \boxed{10:57}$

f)  $\boxed{03:22} \xrightarrow{+ \square} \boxed{05:53}$

g)  $\boxed{10:41} \xrightarrow{+ \square} \boxed{12:08}$

h)  $\boxed{01:36} \xrightarrow{+ \square} \boxed{02:09}$

i)  $\boxed{02:25} \xrightarrow{+ \square} \boxed{12:10}$

j)  $\boxed{04:01} \xrightarrow{+ \square} \boxed{06:14}$

Viel Erfolg!