

Arbeitsblatt

28.07.2013

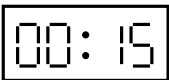
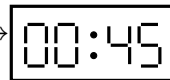
Kostenlos auf dw-aufgaben.de

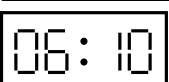
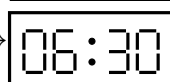
Aufgaben-Quickname: 6218

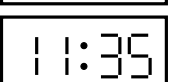
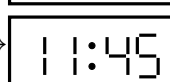
Aufgabe 1

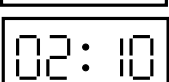
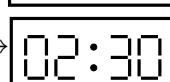
Was zeigte die Anzeige, bevor die angegebene Zeitspanne verging?


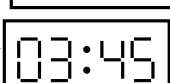
Quick:
6218

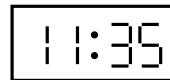
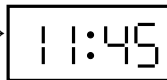
a)  $\xrightarrow{+0:30}$ 

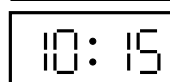
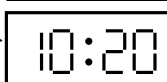
c)  $\xrightarrow{+0:20}$ 


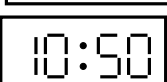
e)  $\xrightarrow{+0:10}$ 

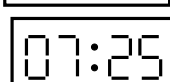
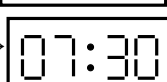
g)  $\xrightarrow{+0:20}$ 

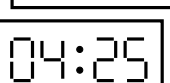
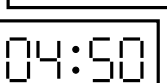
i)  $\xrightarrow{+0:40}$ 

b)  $\xrightarrow{+0:10}$ 

d)  $\xrightarrow{+0:05}$ 

f)  $\xrightarrow{+0:50}$ 

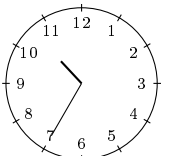
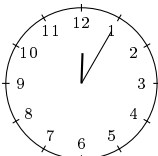
h)  $\xrightarrow{+0:05}$ 

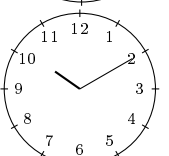
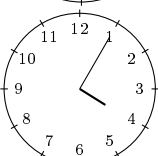
j)  $\xrightarrow{+0:25}$ 

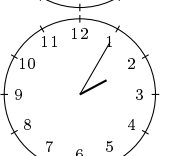
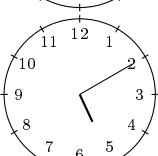
Aufgabe 2

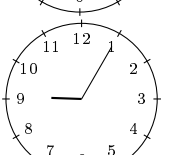
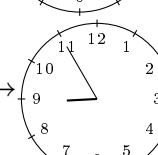
Wie standen die Zeiger, bevor die angegebene Zeitspanne verging?

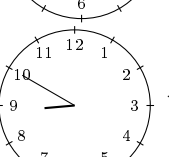
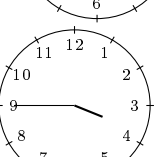
Quick:
6218


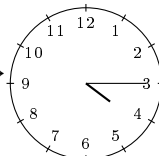
a)  $\xrightarrow{+1:30}$ 

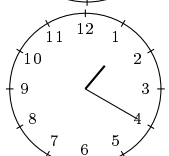
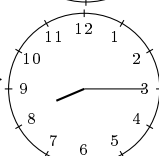
c)  $\xrightarrow{+5:55}$ 

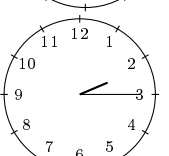
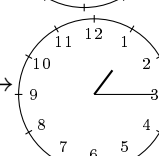
e)  $\xrightarrow{+3:05}$ 

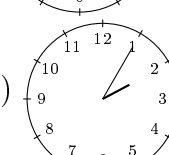
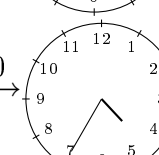
g)  $\xrightarrow{+11:50}$ 

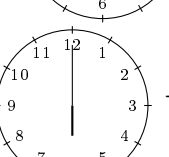
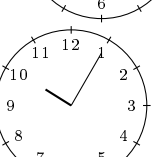
i)  $\xrightarrow{+6:55}$ 

b)  $\xrightarrow{+1:10}$ 

d)  $\xrightarrow{+6:55}$ 

f)  $\xrightarrow{+11:00}$ 





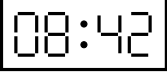
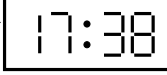
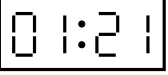
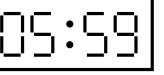

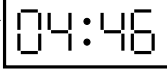
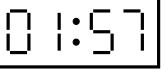

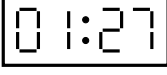
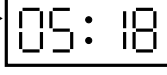
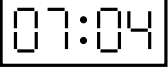
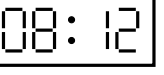
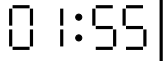
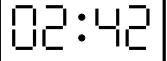

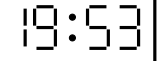
h)  $\xrightarrow{+2:30}$ 

j)  $\xrightarrow{+4:05}$ 

Aufgabe 3

Quick:
6218

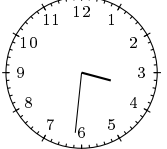
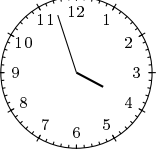
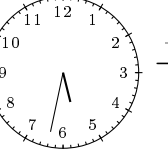

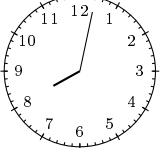
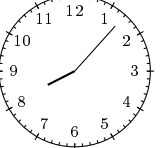
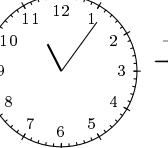


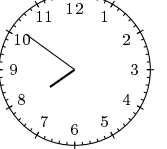
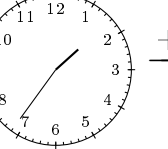

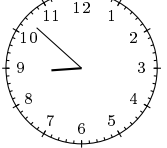
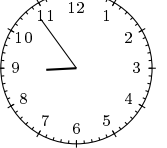
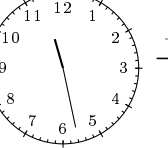

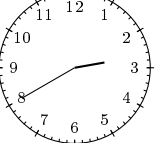
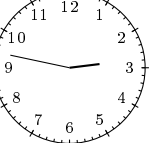
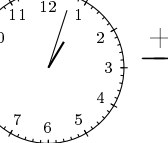
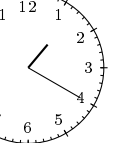
Was zeigte die Anzeige, bevor die angegebene Zeitspanne verging?

- | | | | | | | | |
|----|---|-----------------------|---|----|---|------------------------|---|
| a) |  | $\xrightarrow{+5:01}$ |  | b) |  | $\xrightarrow{+10:31}$ |  |
| c) |  | $\xrightarrow{+8:56}$ |  | d) |  | $\xrightarrow{+4:38}$ |  |
| e) |  | $\xrightarrow{+4:21}$ |  | f) |  | $\xrightarrow{+11:53}$ |  |
| g) |  | $\xrightarrow{+3:51}$ |  | h) |  | $\xrightarrow{+1:08}$ |  |
| i) |  | $\xrightarrow{+0:47}$ |  | j) |  | $\xrightarrow{+10:37}$ |  |

Aufgabe 4

Quick:
6218

Was zeigte die Anzeige, bevor die angegebene Zeitspanne verging?

- | | | | | | | | |
|----|---|-----------------------|---|----|---|-----------------------|---|
| a) |  | $\xrightarrow{+0:26}$ |  | b) |  | $\xrightarrow{+0:16}$ |  |
| c) |  | $\xrightarrow{+0:05}$ |  | d) |  | $\xrightarrow{+0:48}$ |  |
| e) |  | $\xrightarrow{+0:11}$ |  | f) |  | $\xrightarrow{+0:20}$ |  |
| g) |  | $\xrightarrow{+0:02}$ |  | h) |  | $\xrightarrow{+0:08}$ |  |
| i) |  | $\xrightarrow{+0:07}$ |  | j) |  | $\xrightarrow{+0:17}$ |  |

Viel Erfolg!