

# Arbeitsblatt

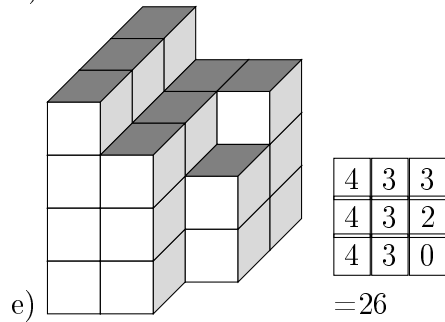
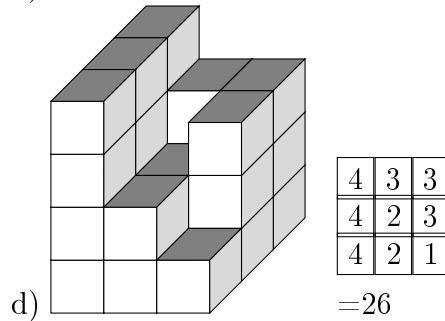
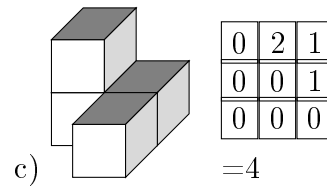
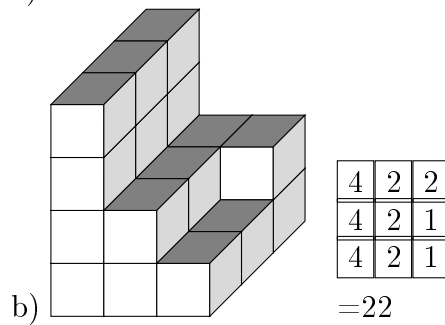
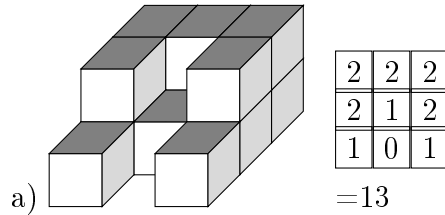
28.07.2013

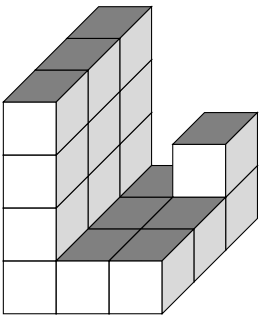
Kostenlos auf [dw-aufgaben.de](http://dw-aufgaben.de)

Aufgaben-Quickname: 6839

## Aufgabe 1

Aus wie vielen Klötzen besteht dieses Bauwerk?

Quick:  
6839

f) 

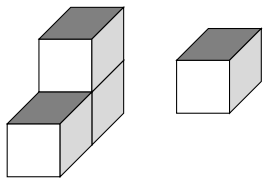
4	1	2
4	1	1
4	1	1

  
=19

Aufgabe 2

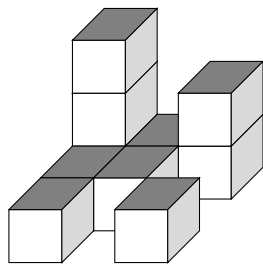
Aus wie vielen Klötzen besteht dieses Bauwerk?

Quick:  
6839

a) 

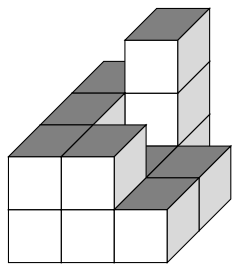
0	0	1
2	0	0
1	0	0

  
=4

b) 

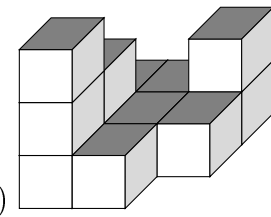
3	1	2
1	1	0
1	0	1

  
=10

c) 

2	3	0
2	1	1
2	2	1

  
=14

d) 

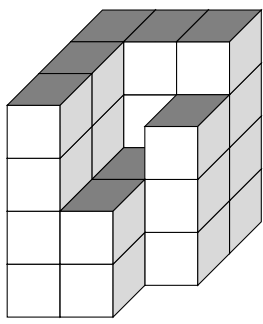
1	1	2
2	1	1
3	1	0

  
=12

Aufgabe 3

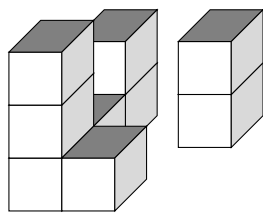
Aus wie vielen Klötzen besteht dieses Bauwerk?

Quick:  
6839

a) 

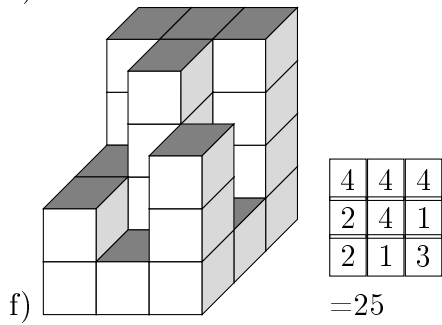
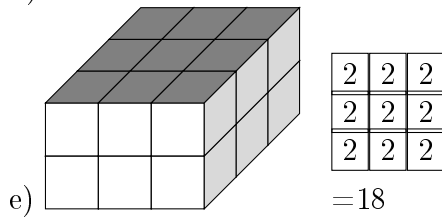
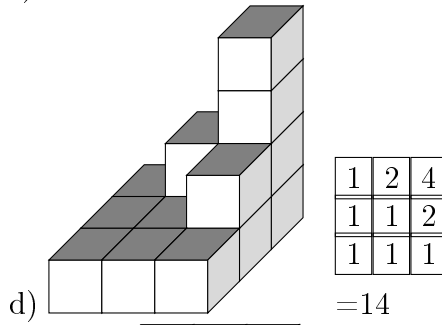
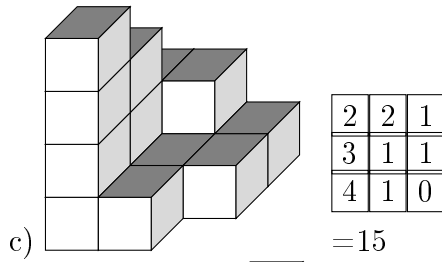
4	4	4
4	2	3
4	2	0

  
=27

b) 

2	0	2
1	0	0
3	1	0

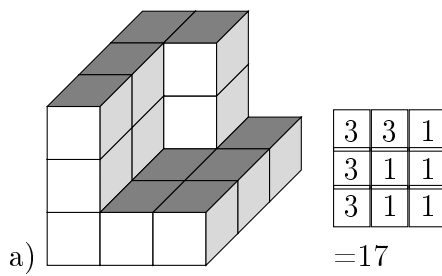
  
=9

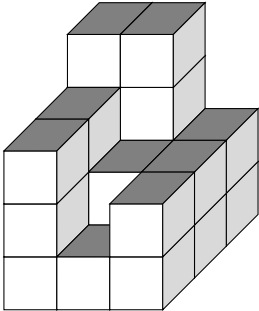


Aufgabe 4

Aus wie vielen Klötzen besteht dieses Bauwerk?

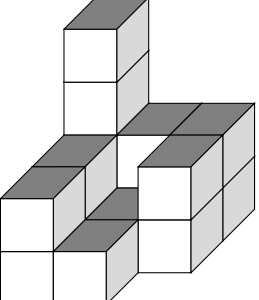
Quick:  
6839



b) 

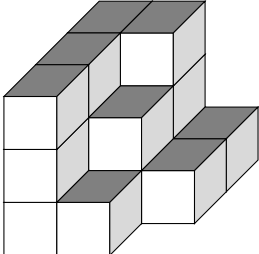
4	4	2
3	2	2
3	1	2

  
=23

c) 

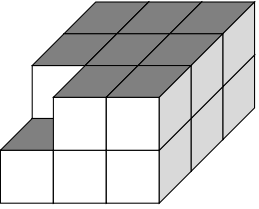
4	2	2
2	1	2
2	1	0

  
=16

d) 

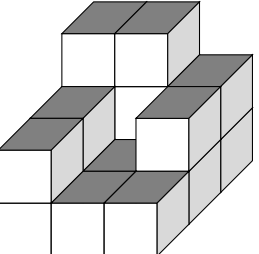
3	3	1
3	2	1
3	1	0

  
=17

e) 

2	2	2
2	2	2
1	2	2

  
=17

f) 

3	3	2
2	1	2
2	1	1

  
=17

Viel Erfolg!