

Arbeitsblatt

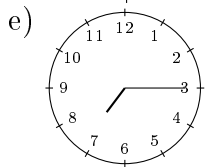
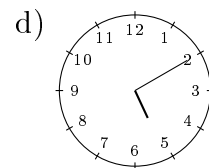
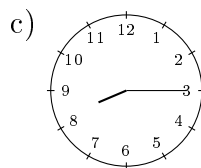
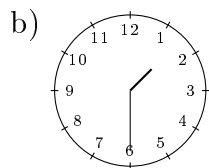
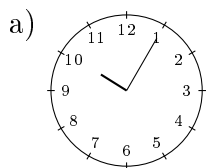
28.07.2013

Kostenlos auf dw-aufgaben.de

Aufgaben-Quickname: 7352

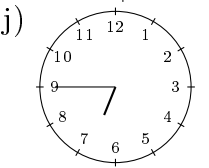
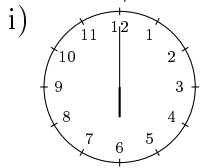
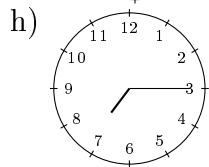
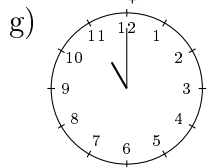
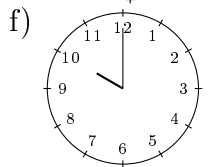
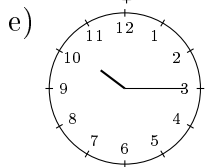
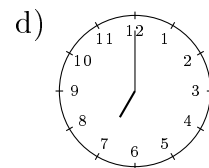
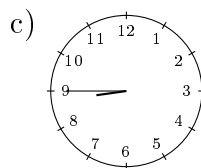
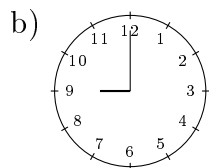
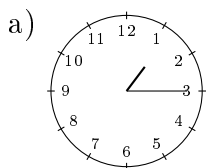
Aufgabe 1

Nenne die angezeigte Uhrzeit, beispielsweise 10:15 Uhr. Nenne jeweils zwei mögliche Zeiten.



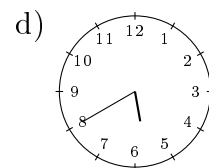
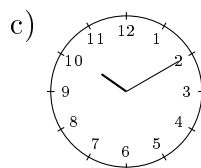
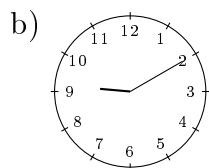
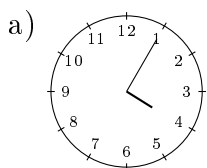
Aufgabe 2

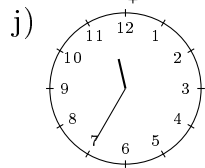
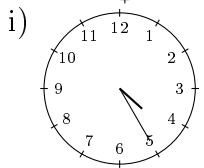
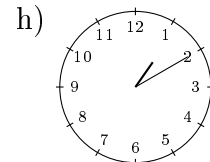
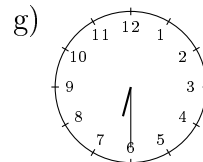
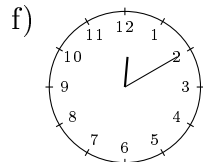
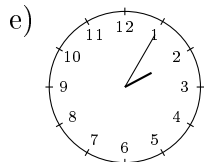
Nenne die angezeigte Uhrzeit, beispielsweise viertel nach Zehn.



Aufgabe 3

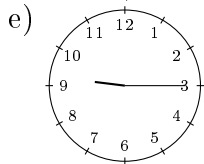
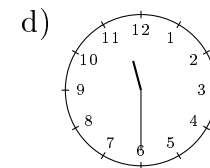
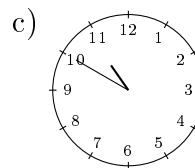
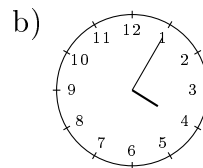
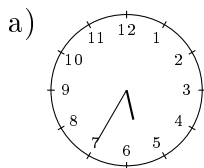
Nenne die angezeigte Uhrzeit, beispielsweise 10:15 Uhr. Nenne jeweils zwei mögliche Zeiten.





Aufgabe 4

Nenne die angezeigte Uhrzeit, beispielsweise 10:15 Uhr. Nenne jeweils zwei mögliche Zeiten.



Viel Erfolg!