

Arbeitsblatt




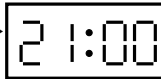

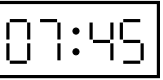

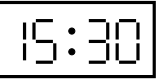

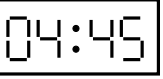

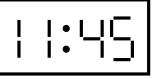
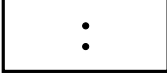
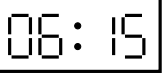
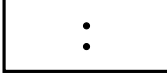
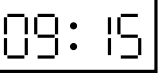

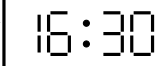

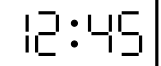
28.07.2013

Kostenlos auf dw-aufgaben.de

Aufgaben-Quickname: 6218

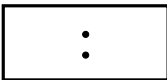
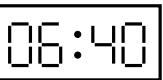
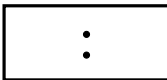


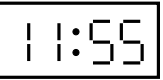



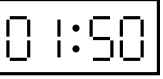

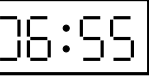
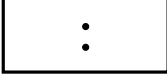
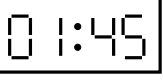
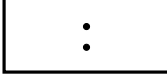


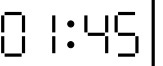

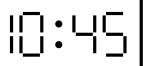
Aufgabe 1

Was zeigte die Anzeige, bevor die angegebene Zeitspanne verging?

- a)  $\xrightarrow{+2:00}$ 
- b)  $\xrightarrow{+11:15}$ 
- c)  $\xrightarrow{+6:15}$ 
- d)  $\xrightarrow{+7:45}$ 
- e)  $\xrightarrow{+2:45}$ 
- f)  $\xrightarrow{+7:00}$ 
- g)  $\xrightarrow{+3:45}$ 
- h)  $\xrightarrow{+3:45}$ 
- i)  $\xrightarrow{+10:15}$ 
- j)  $\xrightarrow{+1:45}$ 

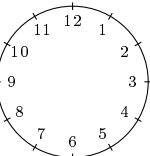
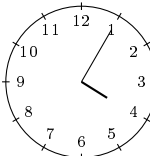
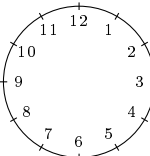
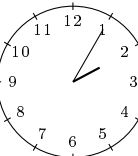
Aufgabe 2

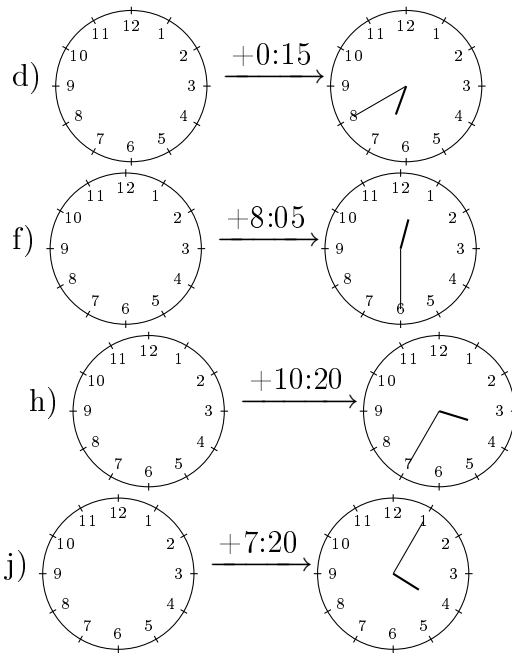
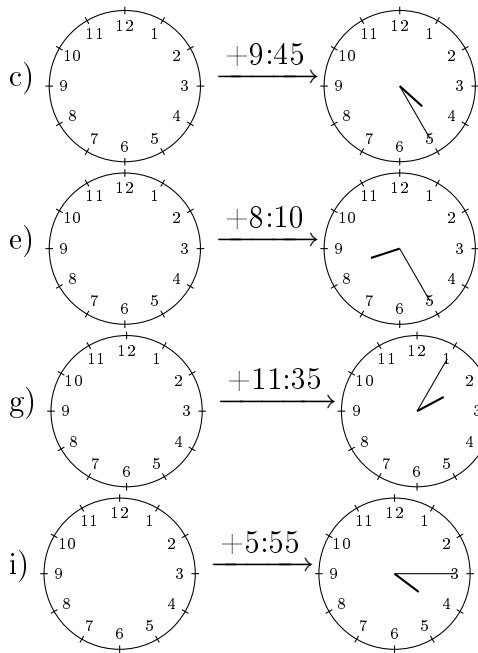
Was zeigte die Anzeige, bevor die angegebene Zeitspanne verging?

- a)  $\xrightarrow{+0:25}$ 
- b)  $\xrightarrow{+0:25}$ 
- c)  $\xrightarrow{+0:15}$ 
- d)  $\xrightarrow{+0:15}$ 
- e)  $\xrightarrow{+0:05}$ 
- f)  $\xrightarrow{+0:15}$ 
- g)  $\xrightarrow{+0:15}$ 
- h)  $\xrightarrow{+0:40}$ 
- i)  $\xrightarrow{+0:05}$ 
- j)  $\xrightarrow{+0:15}$ 

Aufgabe 3

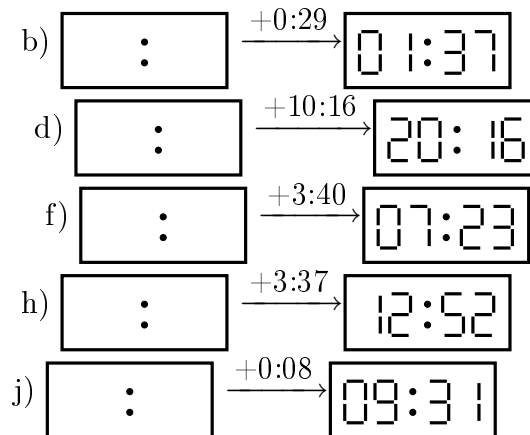
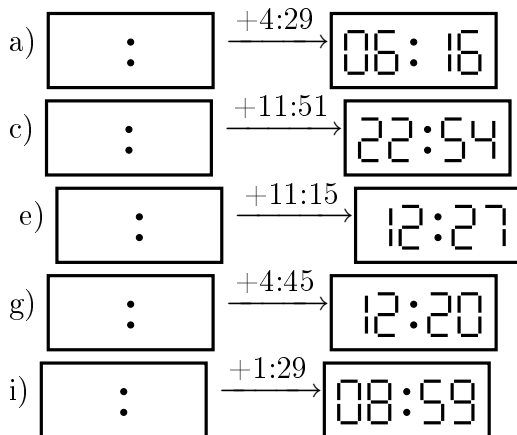
Wie standen die Zeiger, bevor die angegebene Zeitspanne verging?

- a)  $\xrightarrow{+5:55}$ 
- b)  $\xrightarrow{+1:35}$ 



Aufgabe 4

Was zeigte die Anzeige, bevor die angegebene Zeitspanne verging?



Viel Erfolg!