

Arbeitsblatt

28.07.2013

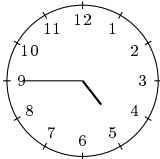
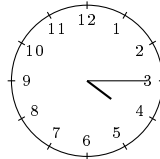
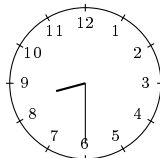
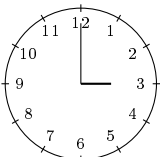
Kostenlos auf dw-aufgaben.de

Aufgaben-Quickname: 7352

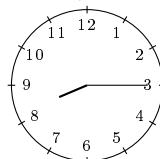
Aufgabe 1

Quick:
7352

Nenne die angezeigte Uhrzeit, beispielsweise viertel nach Zehn.

a)  viertel vor Fünfb)  viertel nach Vierc)  halb Zweid)  halb Neune)  Dreif)  halb Zehng)  viertel nach

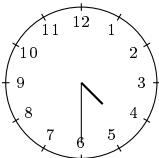
Eins

h)  viertel nach

Acht

i)  viertel nach

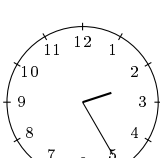
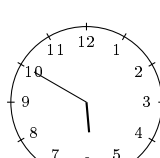
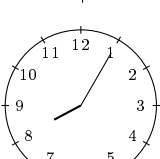
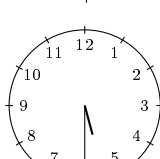
Fünf

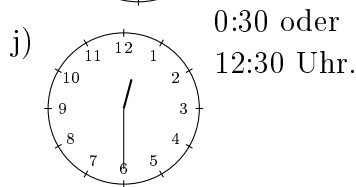
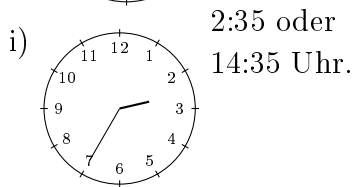
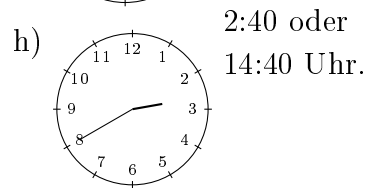
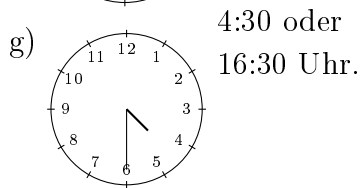
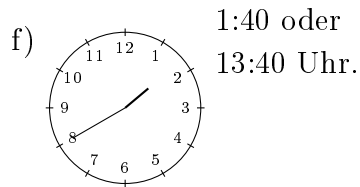
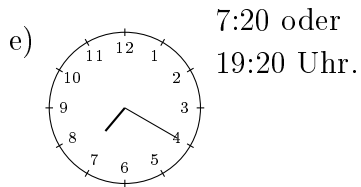
j)  halb Fünf

Aufgabe 2

Quick:
7352

Nenne die angezeigte Uhrzeit, beispielsweise 10:15 Uhr. Nenne jeweils zwei mögliche Zeiten.

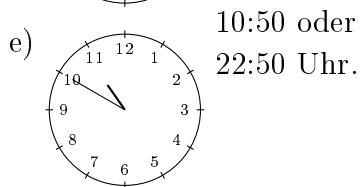
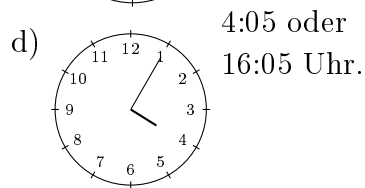
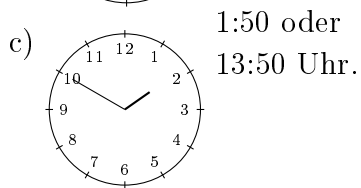

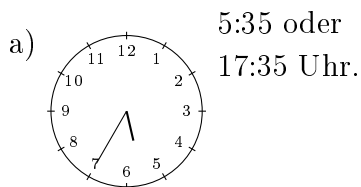
a)  2:25 oder
14:25 Uhr.b)  5:50 oder
17:50 Uhr.c)  8:05 oder
20:05 Uhr.d)  5:30 oder
17:30 Uhr.



Aufgabe 3

Nenne die angezeigte Uhrzeit, beispielsweise 10:15 Uhr. Nenne jeweils zwei mögliche Zeiten.

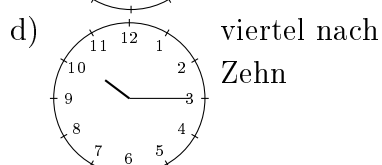
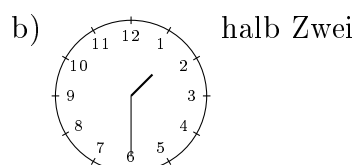
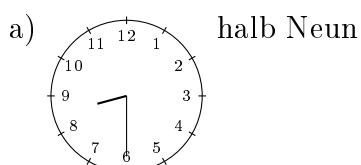
Quick:
7352



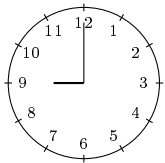
Aufgabe 4

Nenne die angezeigte Uhrzeit, beispielsweise viertel nach Zehn.

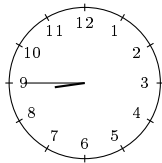
Quick:
7352



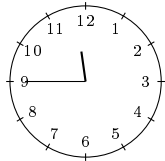
e) Neun



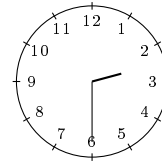
f) viertel vor Neun



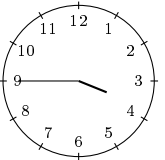
g) viertel vor Zwölf



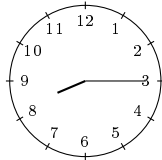
h) halb Drei



i) viertel vor Vier



j) viertel nach
Acht



Viel Erfolg!