

Arbeitsblatt

28.07.2013

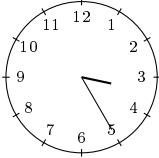
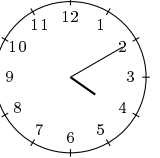
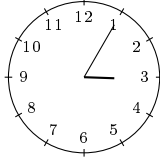
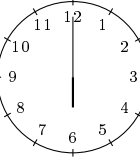
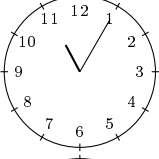
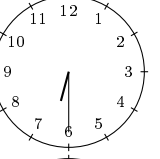
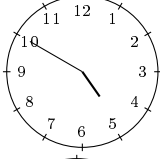
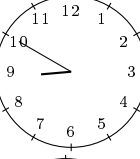
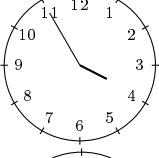
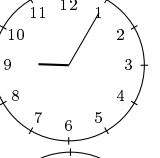
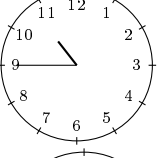
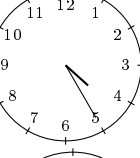
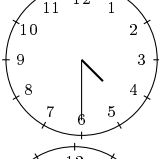
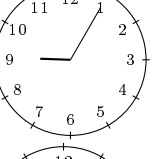
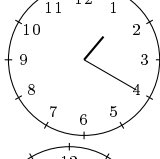
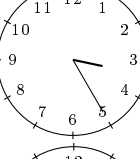
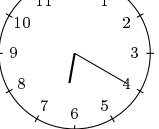
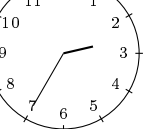
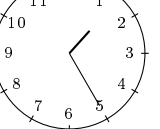
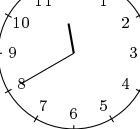
Kostenlos auf dw-aufgaben.de

Aufgaben-Quickname: 6245

Aufgabe 1

Wie stehen die Zeiger, nach dem die angegebene Zeitspanne vergangen ist?

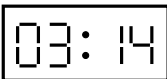

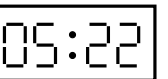
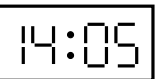

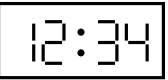
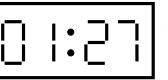
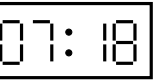
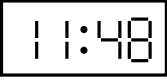
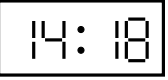
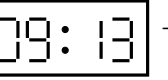


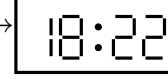

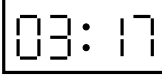
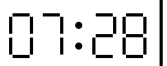
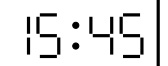
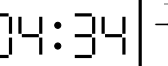
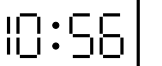
Quick:
6245

a)		$\xrightarrow{+0:45}$		b)		$\xrightarrow{+2:55}$	
c)		$\xrightarrow{+7:25}$		d)		$\xrightarrow{+4:00}$	
e)		$\xrightarrow{+5:10}$		f)		$\xrightarrow{+5:40}$	
g)		$\xrightarrow{+4:35}$		h)		$\xrightarrow{+2:05}$	
i)		$\xrightarrow{+8:15}$		j)		$\xrightarrow{+10:15}$	

Aufgabe 2

Was zeigt die Anzeige, nach dem die angegebene Zeitspanne vergangen ist?

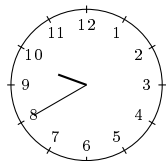
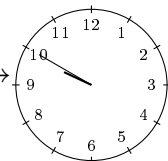
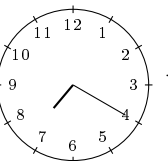
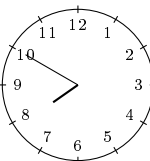
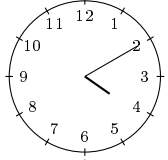
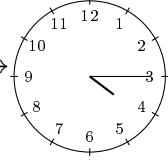
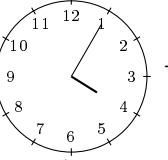
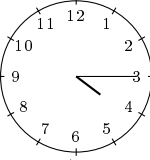
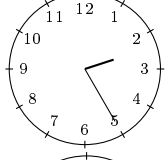
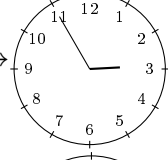
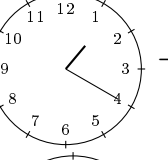
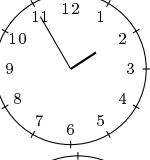
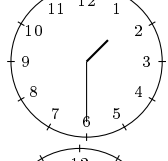
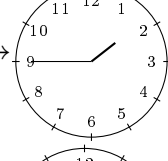
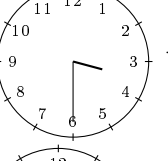
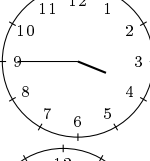
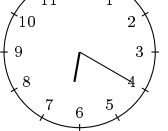
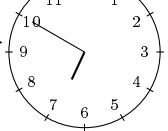
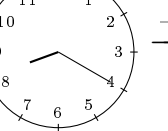
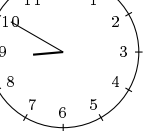
Quick:
6245

a)		$\xrightarrow{+5:58}$		b)		$\xrightarrow{+8:43}$	
c)		$\xrightarrow{+3:08}$		d)		$\xrightarrow{+5:51}$	
e)		$\xrightarrow{+2:30}$		f)		$\xrightarrow{+8:07}$	
g)		$\xrightarrow{+10:22}$		h)		$\xrightarrow{+0:24}$	
i)		$\xrightarrow{+8:17}$		j)		$\xrightarrow{+6:22}$	

Aufgabe 3

Quick:
6245

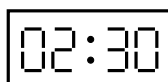
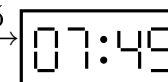
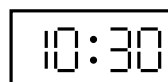
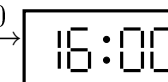
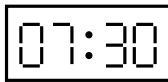
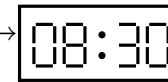

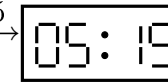




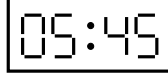
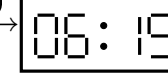
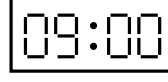
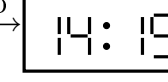
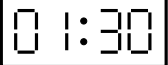

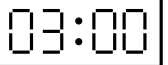

Wie stehen die Zeiger, nach dem die angegebene Zeitspanne vergangen ist?

a)		$+0:10$		b)		$+0:30$	
c)		$+0:05$		d)		$+0:10$	
e)		$+0:30$		f)		$+0:35$	
g)		$+0:15$		h)		$+0:15$	
i)		$+0:30$		j)		$+0:30$	

Aufgabe 4

Quick:
6245

Was zeigt die Anzeige, nach dem die angegebene Zeitspanne vergangen ist?

a)		$+5:15$		b)		$+5:30$	
c)		$+1:00$		d)		$+2:15$	
e)		$+10:00$		f)		$+11:15$	
g)		$+0:30$		h)		$+5:15$	
i)		$+9:45$		j)		$+7:45$	

Viel Erfolg!