

# Arbeitsblatt

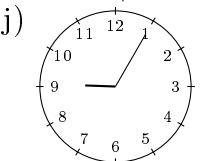
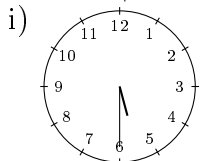
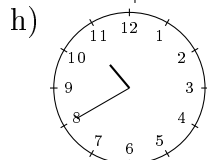
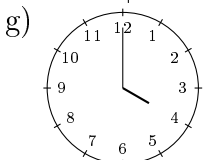
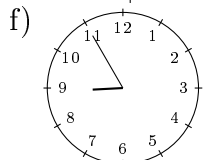
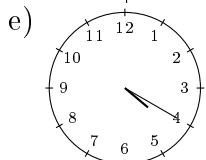
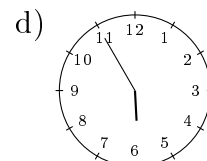
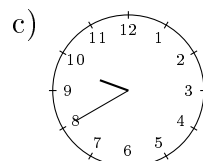
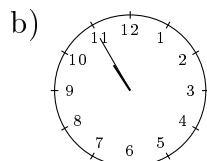
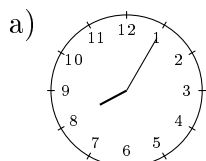
28.07.2013

Kostenlos auf [dw-aufgaben.de](http://dw-aufgaben.de)

Aufgaben-Quickname: 7352

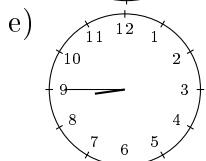
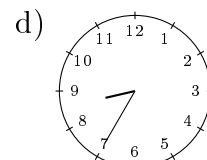
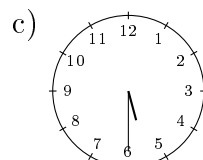
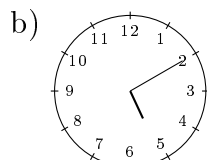
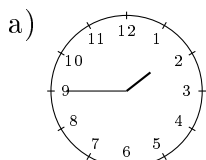
## Aufgabe 1

Nenne die angezeigte Uhrzeit, beispielsweise 10:15 Uhr. Nenne jeweils zwei mögliche Zeiten.



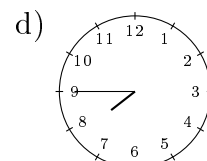
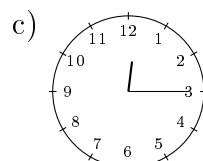
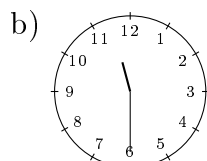
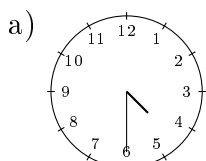
## Aufgabe 2

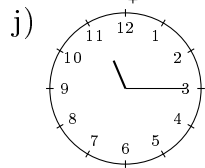
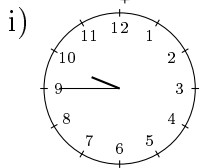
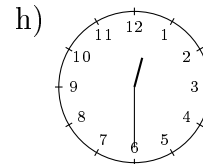
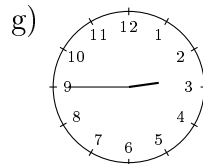
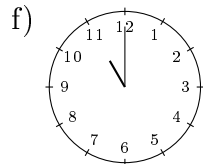
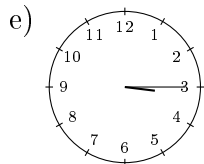
Nenne die angezeigte Uhrzeit, beispielsweise 10:15 Uhr. Nenne jeweils zwei mögliche Zeiten.



## Aufgabe 3

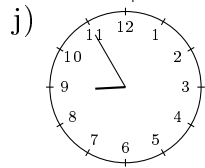
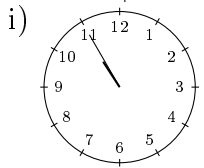
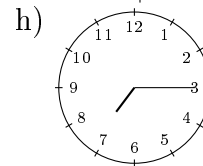
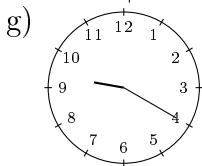
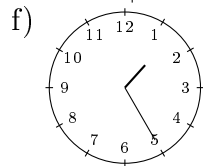
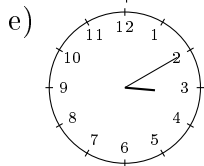
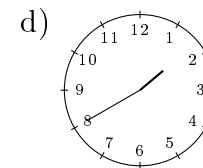
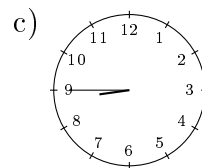
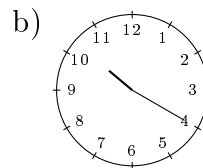
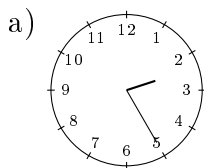
Nenne die angezeigte Uhrzeit, beispielsweise viertel nach Zehn.





#### Aufgabe 4

Nenne die angezeigte Uhrzeit, beispielsweise 10:15 Uhr. Nenne jeweils zwei mögliche Zeiten.



Viel Erfolg!