

# Arbeitsblatt

22.11.2013

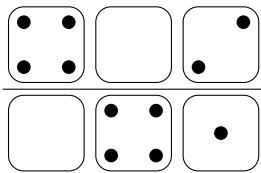
Kostenlos auf [dw-aufgaben.de](http://dw-aufgaben.de)

Aufgaben-Quickname: 1887

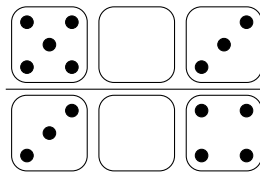
## Aufgabe 1

Zeichne die Würfelaugen so ein, dass die angegebene Summe stimmt.


a) Jede Reihe: 10



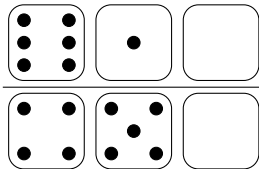
b) Jede Reihe: 10



c) Jede Reihe: 10




d) Jede Reihe: 10




## Aufgabe 2

Zeichne die Würfelaugen so ein, dass die angegebene Summe stimmt.


a) Jede Reihe: 20




b) Jede Reihe: 20



c) Jede Reihe: 20




d) Jede Reihe: 20



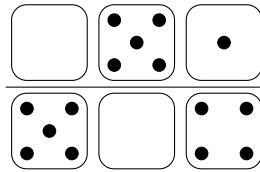
### Aufgabe 3

Zeichne die Würfelaugen so ein, dass die angegebene Summe stimmt.

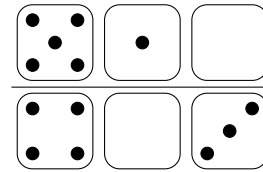
a) Jede Reihe: 12



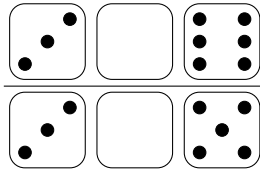
b) Jede Reihe: 12




c) Jede Reihe: 12




d) Jede Reihe: 13



e) Jede Reihe: 14



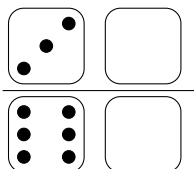
f) Jede Reihe: 14



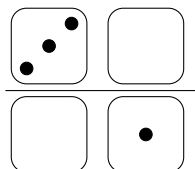
### Aufgabe 4

Zeichne die Würfelaugen so ein, dass die angegebene Summe stimmt.

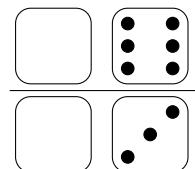
a) Jede Reihe: 9



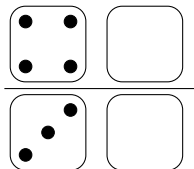
b) Jede Reihe: 6



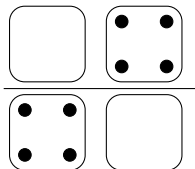
c) Jede Reihe: 9



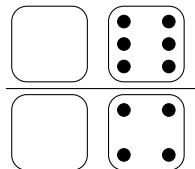
d) Jede Reihe: 6



e) Jede Reihe: 6



f) Jede Reihe: 7



Viel Erfolg!