

Arbeitsblatt

28.07.2013

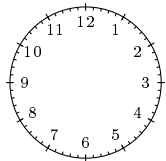
Kostenlos auf dw-aufgaben.de

Aufgaben-Quickname: 5840

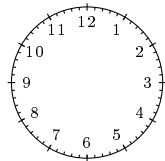
Aufgabe 1

Zeichne die Stunden- und Minutenzeiger zu der angegebenen Uhrzeit ein.

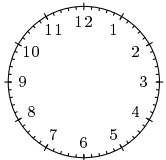
a) drei Minuten
nach Vier



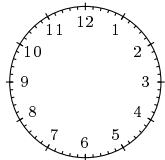
b) acht nach halb
Sechs



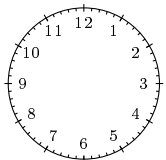
c) fünf nach halb
Acht



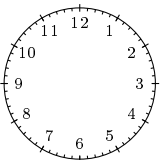
d) acht Minuten
nach Vier



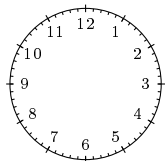
e) zwölf vor Sieben



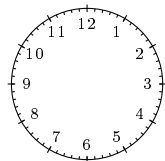
f) drei Minuten
nach Zehn



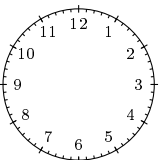
g) Fünf



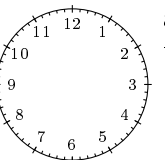
h) zehn nach Zwei



i) acht Minuten
nach Fünf



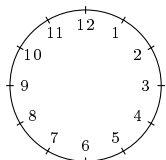
j) acht nach halb
Vier



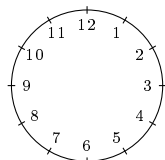
Aufgabe 2

Zeichne die Stunden- und Minutenzeiger zu der angegebenen Uhrzeit ein.

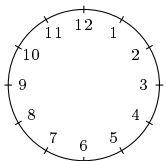
a) viertel vor
Sieben



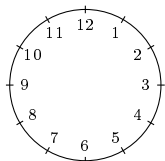
b) halb Zwei



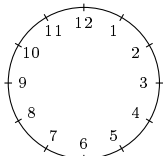
c) viertel nach
Zehn



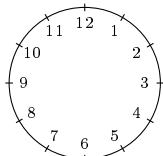
d) halb Drei



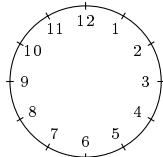
e) viertel nach Drei



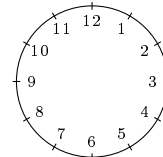
f) Zehn



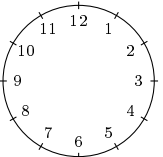
g) Sechs



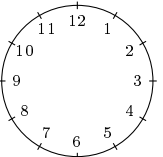
h) Zwölf



i) viertel nach Acht



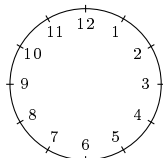
j) viertel nach Sieben



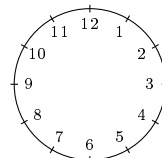
Aufgabe 3

Zeichne die Stunden- und Minutenzeiger zu der angegebenen Uhrzeit ein.

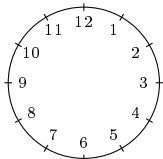
a) 4:15 Uhr



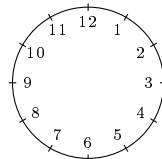
b) 22:45 Uhr



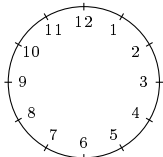
c) 2:30 Uhr



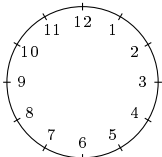
d) 6:45 Uhr



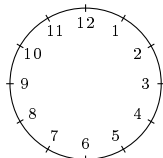
e) 1:25 Uhr



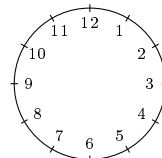
f) 23:45 Uhr



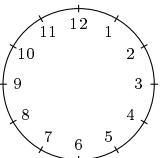
g) 3:35 Uhr



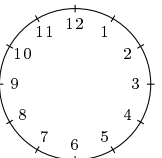
h) 19:45 Uhr



i) 2:25 Uhr



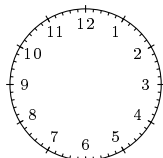
j) 9:45 Uhr



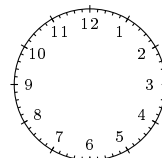
Aufgabe 4

Zeichne die Stunden- und Minutenzeiger zu der angegebenen Uhrzeit ein.

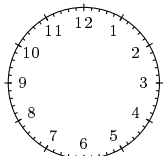
a) 7:18 Uhr



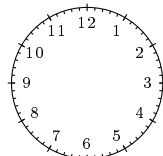
b) 7:35 Uhr



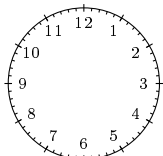
c) 3:14 Uhr



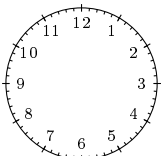
d) 20:40 Uhr



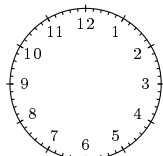
e) 21:13 Uhr



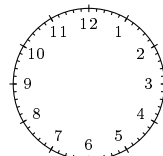
f) 0:48 Uhr



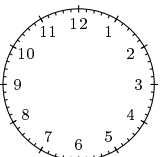
g) 10:23 Uhr



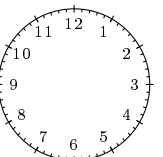
h) 6:55 Uhr



i) 1:05 Uhr



j) 14:03 Uhr



Viel Erfolg!