

# Arbeitsblatt

28.07.2013

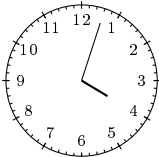
Kostenlos auf [dw-aufgaben.de](http://dw-aufgaben.de)

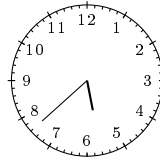
Aufgaben-Quickname: 5840

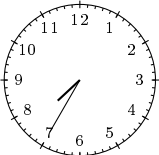
## Aufgabe 1

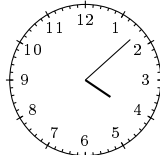
Zeichne die Stunden- und Minutenzeiger zu der angegebenen Uhrzeit ein.

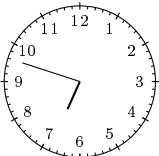
Quick:  
5840

a)  drei Minuten  
nach Vier


b)  acht nach halb  
Sechs


c)  fünf nach halb  
Acht

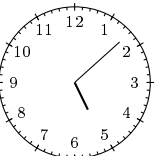
d)  acht Minuten  
nach Vier

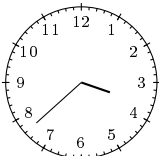
e)  zwölf vor Sieben

f)  drei Minuten  
nach Zehn

g)  Fünf

h)  zehn nach Zwei

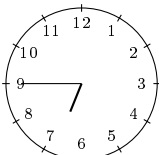
i)  acht Minuten  
nach Fünf

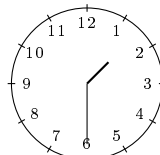
j)  acht nach halb  
Vier

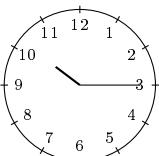
## Aufgabe 2

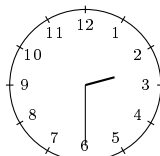
Zeichne die Stunden- und Minutenzeiger zu der angegebenen Uhrzeit ein.

Quick:  
5840

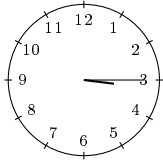
a)  viertel vor  
Sieben

b)  halb Zwei

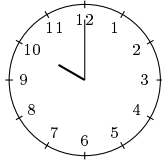
c)  viertel nach  
Zehn

d)  halb Drei

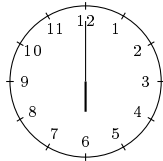
e) viertel nach Drei



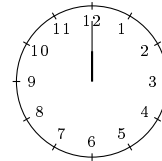
f) Zehn



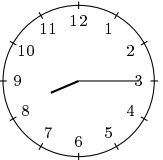
g) Sechs



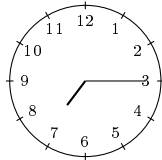
h) Zwölf



i) viertel nach Acht



j) viertel nach Sieben

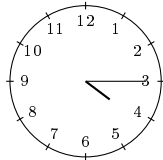


### Aufgabe 3

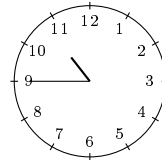
Zeichne die Stunden- und Minutenzeiger zu der angegebenen Uhrzeit ein.

Quick:  
5840

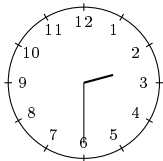
a) 4:15 Uhr



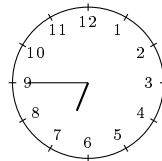
b) 22:45 Uhr



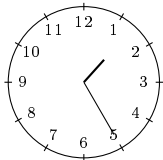
c) 2:30 Uhr



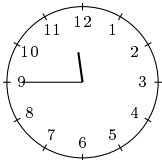
d) 6:45 Uhr



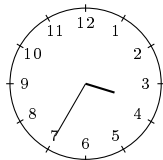
e) 1:25 Uhr



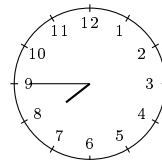
f) 23:45 Uhr



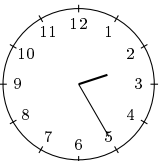
g) 3:35 Uhr



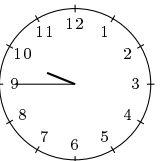
h) 19:45 Uhr



i) 2:25 Uhr



j) 9:45 Uhr

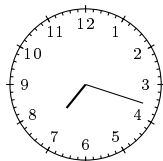


### Aufgabe 4

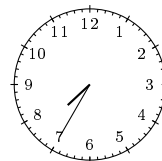
Zeichne die Stunden- und Minutenzeiger zu der angegebenen Uhrzeit ein.

Quick:  
5840

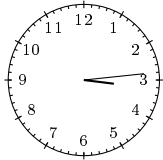
a) 7:18 Uhr



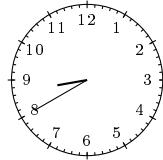
b) 7:35 Uhr




c) 3:14 Uhr



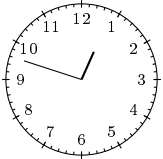
d) 20:40 Uhr



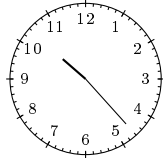
e) 21:13 Uhr



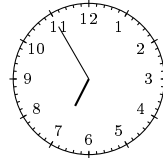
f) 0:48 Uhr




g) 10:23 Uhr



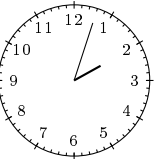
h) 6:55 Uhr



i) 1:05 Uhr



j) 14:03 Uhr



Viel Erfolg!