

Arbeitsblatt

28.07.2013

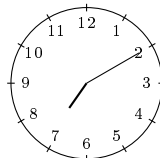
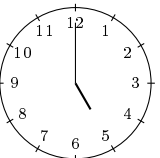
Kostenlos auf dw-aufgaben.de

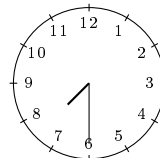
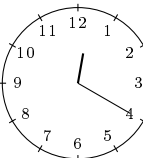
Aufgaben-Quickname: 6245

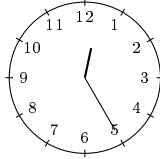
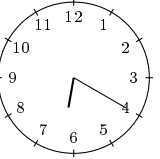
Aufgabe 1

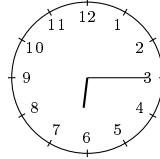
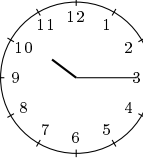
Wie stehen die Zeiger, nach dem die angegebene Zeitspanne vergangen ist?

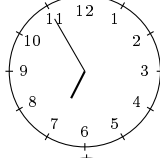
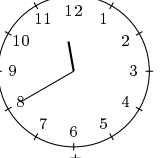
Quick:
6245

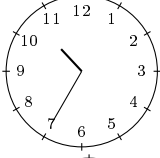
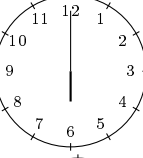
a)  $\xrightarrow{+9:50}$ 

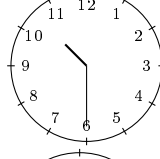
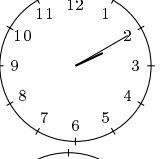
b)  $\xrightarrow{+4:50}$ 

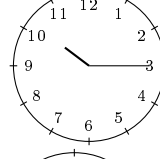
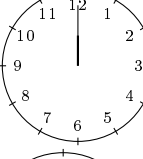
c)  $\xrightarrow{+5:55}$ 


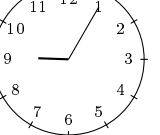
d)  $\xrightarrow{+4:00}$ 

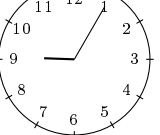
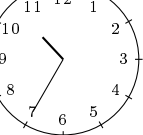
e)  $\xrightarrow{+4:45}$ 

f)  $\xrightarrow{+7:25}$ 

g)  $\xrightarrow{+3:40}$ 

h)  $\xrightarrow{+1:45}$ 

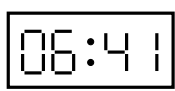
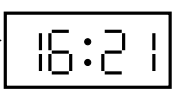
i)  $\xrightarrow{+7:25}$ 

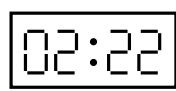
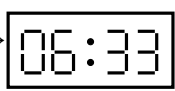
j)  $\xrightarrow{+1:30}$ 



Aufgabe 2



Was zeigt die Anzeige, nach dem die angegebene Zeitspanne vergangen ist?

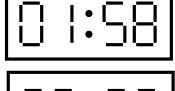
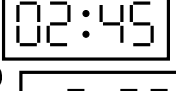
Quick:
6245



a)  $\xrightarrow{+9:40}$ 



b)  $\xrightarrow{+4:11}$ 

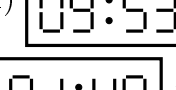
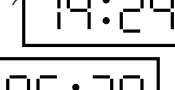
c)  $\xrightarrow{+8:39}$ 

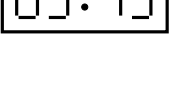
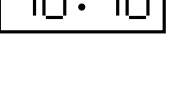
d)  $\xrightarrow{+6:13}$ 

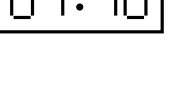
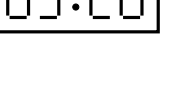
e)  $\xrightarrow{+0:47}$ 

f)  $\xrightarrow{+6:47}$ 

g)  $\xrightarrow{+10:59}$ 

h)  $\xrightarrow{+4:31}$ 

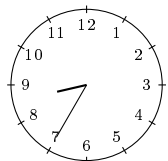
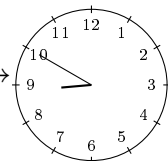
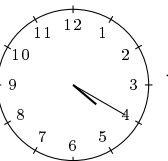
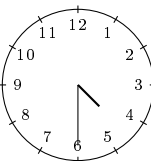
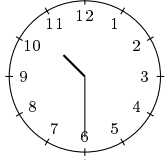
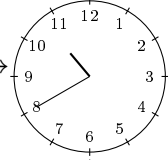
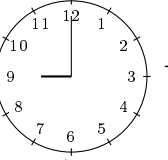
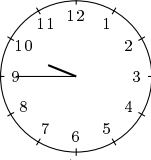
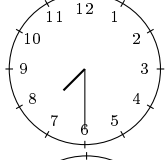
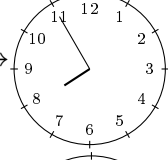
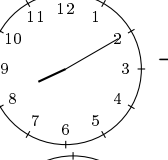
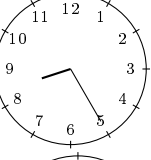
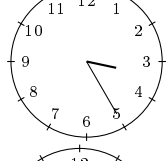
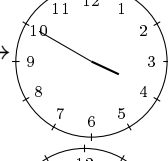
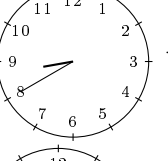
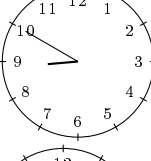
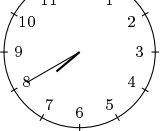
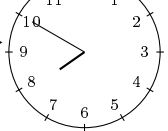
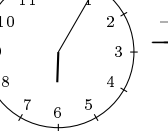
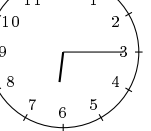
i)  $\xrightarrow{+0:51}$ 

j)  $\xrightarrow{+3:40}$ 

Aufgabe 3

Quick:
6245

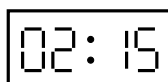
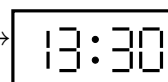
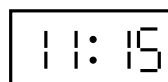
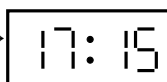



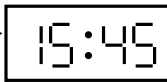
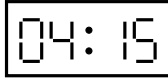
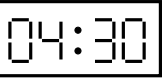

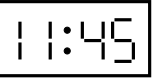
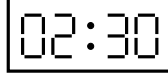
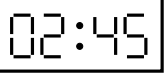
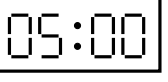
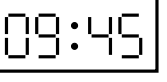




Wie stehen die Zeiger, nach dem die angegebene Zeitspanne vergangen ist?

a)		$\xrightarrow{+0:15}$		b)		$\xrightarrow{+0:10}$	
c)		$\xrightarrow{+0:10}$		d)		$\xrightarrow{+0:45}$	
e)		$\xrightarrow{+0:25}$		f)		$\xrightarrow{+0:15}$	
g)		$\xrightarrow{+0:25}$		h)		$\xrightarrow{+0:10}$	
i)		$\xrightarrow{+0:10}$		j)		$\xrightarrow{+0:10}$	

Aufgabe 4

Quick:
6245

Was zeigt die Anzeige, nach dem die angegebene Zeitspanne vergangen ist?

a)		$\xrightarrow{+11:15}$		b)		$\xrightarrow{+6:00}$	
c)		$\xrightarrow{+5:45}$		d)		$\xrightarrow{+10:15}$	
e)		$\xrightarrow{+0:15}$		f)		$\xrightarrow{+6:45}$	
g)		$\xrightarrow{+0:15}$		h)		$\xrightarrow{+4:45}$	
i)		$\xrightarrow{+11:15}$		j)		$\xrightarrow{+5:30}$	

Viel Erfolg!