

Arbeitsblatt

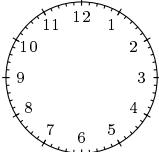
28.07.2013

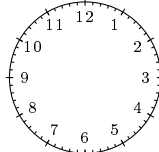
Kostenlos auf dw-aufgaben.de

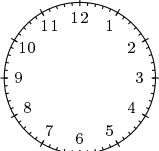
Aufgaben-Quickname: 5840

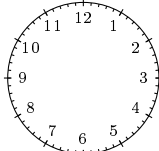
Aufgabe 1

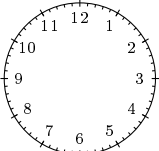
Zeichne die Stunden- und Minutenzeiger zu der angegebenen Uhrzeit ein.

a)  acht vor halb
Neun

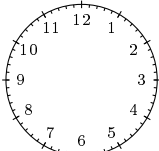
b)  fünf nach halb
Sieben

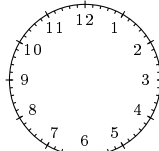
c)  sechs Minuten
vor Neun

d)  siebzehn nach
Zwei

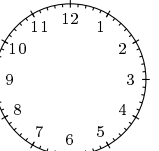
e)  vier vor halb
Zehn

f)  drei Minuten
vor Zwei

g)  sieben vor halb
Vier

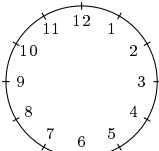
h)  zwei nach halb
Neun

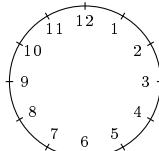
i)  sechzehn nach
Drei

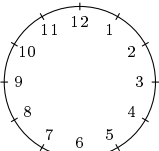
j)  vier Minuten
vor Drei

Aufgabe 2

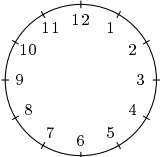
Zeichne die Stunden- und Minutenzeiger zu der angegebenen Uhrzeit ein.

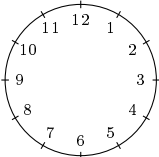
a)  viertel vor Fünf

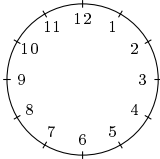
b)  halb Elf

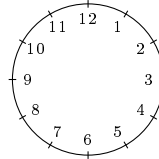
c)  Fünf

d)  viertel nach
Zwei

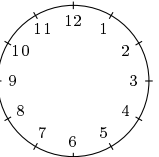
e)  viertel nach Drei

f)  Zehn

g)  viertel nach
Acht

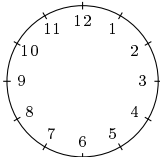
h)  Eins

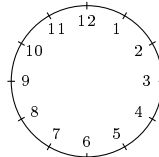
i)  halb Eins

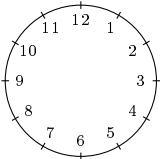
j)  halb Drei

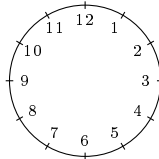
Aufgabe 3

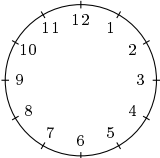
Zeichne die Stunden- und Minutenzeiger zu der angegebenen Uhrzeit ein.

a)  9:50 Uhr

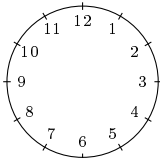
b)  12:40 Uhr

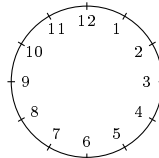
c)  4:10 Uhr

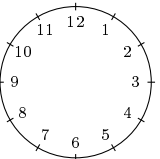
d)  10:15 Uhr

e)  0:50 Uhr

f)  21:05 Uhr

g)  3:10 Uhr

h)  17:20 Uhr

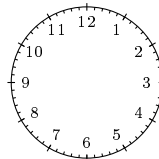
i)  8:45 Uhr

j)  23:15 Uhr

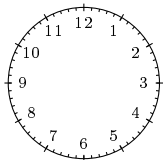
Aufgabe 4

Zeichne die Stunden- und Minutenzeiger zu der angegebenen Uhrzeit ein.

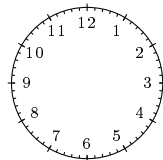
a)  22:33 Uhr

b)  20:37 Uhr

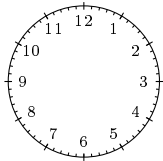
c) 13:47 Uhr



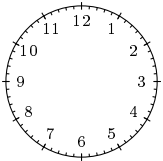
d) 14:32 Uhr



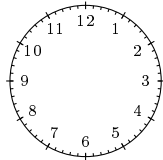
e) 6:19 Uhr



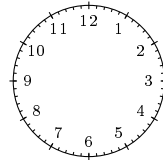
f) 0:56 Uhr



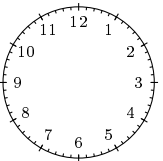
g) 2:15 Uhr



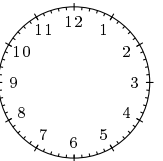
h) 10:22 Uhr



i) 15:23 Uhr



j) 1:40 Uhr



Viel Erfolg!