

Arbeitsblatt

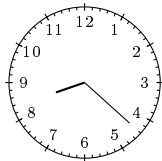
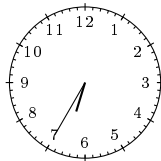
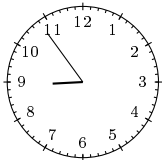

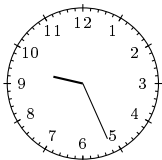
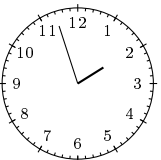
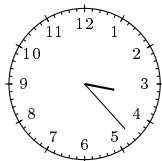
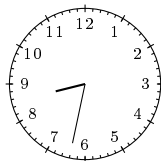
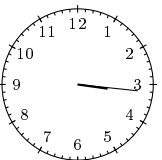
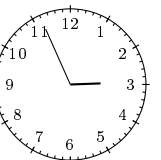
28.07.2013

Kostenlos auf dw-aufgaben.de

Aufgaben-Quickname: 5840

Aufgabe 1

Zeichne die Stunden- und Minutenzeiger zu der angegebenen Uhrzeit ein.

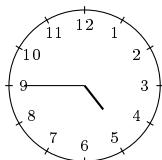
Quick:
5840a) acht vor halb
Neunb) fünf nach halb
Siebenc) sechs Minuten
vor Neund) siebzehn nach
Zweie) vier vor halb
Zehnf) drei Minuten
vor Zweig) sieben vor halb
Vierh) zwei nach halb
Neuni) sechzehn nach
Dreij) vier Minuten
vor Drei

Aufgabe 2

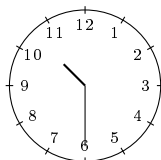
Zeichne die Stunden- und Minutenzeiger zu der angegebenen Uhrzeit ein.

Quick:
5840

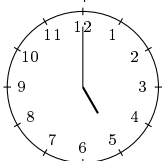
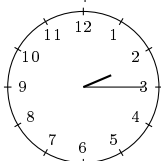
a) viertel vor Fünf

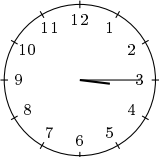
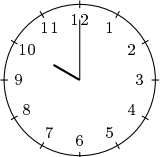
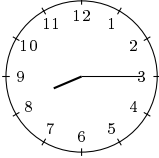
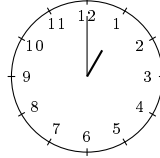
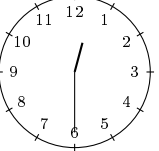
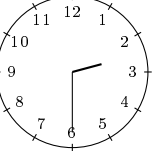


b) halb Elf



c) Fünf

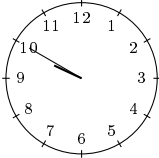
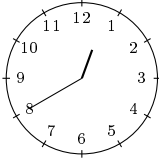
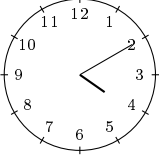
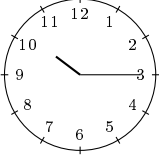
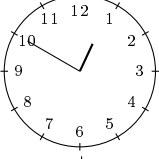
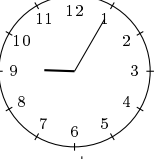
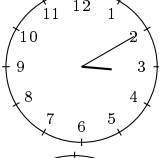
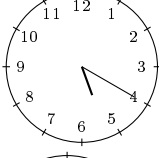
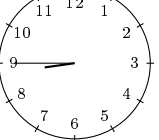
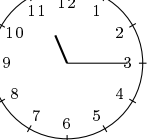
d) viertel nach
Zwei

- | | |
|--|--|
| e)  viertel nach Drei | f)  Zehn |
| g)  viertel nach Acht | h)  Eins |
| i)  halb Eins | j)  halb Drei |

Aufgabe 3

Zeichne die Stunden- und Minutenzeiger zu der angegebenen Uhrzeit ein.

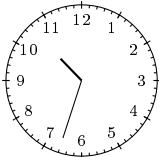
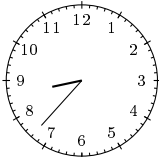
Quick:
5840

- | | |
|---|--|
| a)  9:50 Uhr | b)  12:40 Uhr |
| c)  4:10 Uhr | d)  10:15 Uhr |
| e)  0:50 Uhr | f)  21:05 Uhr |
| g)  3:10 Uhr | h)  17:20 Uhr |
| i)  8:45 Uhr | j)  23:15 Uhr |

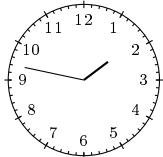
Aufgabe 4

Zeichne die Stunden- und Minutenzeiger zu der angegebenen Uhrzeit ein.

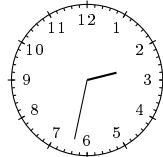
Quick:
5840

- | | |
|--|--|
| a)  22:33 Uhr | b)  20:37 Uhr |
|--|--|

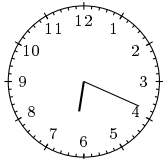
c) 13:47 Uhr



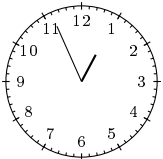
d) 14:32 Uhr



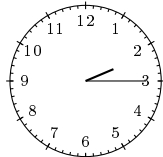
e) 6:19 Uhr



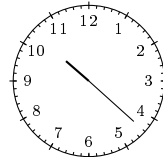
f) 0:56 Uhr



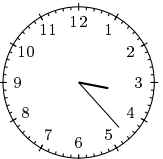
g) 2:15 Uhr




h) 10:22 Uhr



i) 15:23 Uhr



j) 1:40 Uhr



Viel Erfolg!